

Electronics Engineering

Control Systems

Comprehensive Theory

with Solved Examples and Practice Questions



MADE EASY
Publications



MADE EASY Publications

Corporate Office: 44-A/4, Kalu Sarai (Near Hauz Khas Metro Station), New Delhi-110016

E-mail: infomep@madeeasy.in

Contact: 011-45124660, 8860378007

Visit us at: www.madeeasypublications.org

Control Systems

© Copyright, by MADE EASY Publications.

All rights are reserved. No part of this publication may be reproduced, stored in or introduced into a retrieval system, or transmitted in any form or by any means (electronic, mechanical, photo-copying, recording or otherwise), without the prior written permission of the above mentioned publisher of this book.

First Edition: 2015

Second Edition: 2016

Third Edition: 2017

Fourth Edition: 2018

Fifth Edition: 2019

Sixth Edition: 2020

Contents

Control Systems

Chapter 1

Introduction	1
1.1 Open Loop Control Systems	1
1.2 Closed Loop Control Systems	2
1.3 Comparison Between Open Loop and Closed Loop Control Systems.....	3
1.4 Laplace Transformation	3

Chapter 2

Transfer Function.....	9
2.1 Transfer Function and Impulse Response Function	9
2.2 Standard Test Signals	10
2.3 Poles and Zeros of a Transfer Function.....	12
2.4 Properties of Transfer Function	13
2.5 Methods of Analysis	15
2.6 DC Gain for Open Loop	16
2.7 Interacting & Non-Interacting Systems.....	25
<i>Student's Assignments-1</i>	28
<i>Student's Assignments-2</i>	28

Chapter 3

Block Diagrams	33
3.1 Block Diagrams : Fundamentals.....	33
3.2 Block Diagram of a Closed-loop System.....	34
3.3 Block Diagram Transformation Theorems.....	35
<i>Student's Assignments-1</i>	59
<i>Student's Assignments-2</i>	61

Chapter 4

Signal Flow Graphs	65
4.1 Introduction	65
4.2 Terminology of SFG	65
4.3 Construction of Signal Flow Graphs.....	67
4.4 Mason's Gain Formula.....	69
<i>Student's Assignments-1</i>	86
<i>Student's Assignments-2</i>	88

Chapter 5

Feedback Characteristics	95
5.1 Feedback and Non-Feedback Systems.....	95
5.2 Effect of Feedback on Overall Gain.....	96
5.3 Effect of Feedback on Sensitivity.....	97
5.4 Effect of Feedback on Stability.....	101
5.5 Control over System Dynamics by the use of Feedback	103
5.6 Control on the Effects of the Disturbance Signals by the Use of Feedback.....	103
5.7 Effect of Noise (Disturbance) Signals.....	104
<i>Student's Assignments-1</i>	106
<i>Student's Assignments-2</i>	107

Chapter 6

Modelling of Control Systems	110
6.1 Mechanical Systems.....	110
6.2 Electrical Systems.....	112
6.3 Analogous Systems	112
6.4 Nodal Method for Writing Differential Equation of Complex Mechanical System.....	113

6.5	Gear Train	113
6.6	Servomechanism.....	118
6.7	Armature Controlled DC Servomotor	119
6.8	Field Controlled DC Servomotor	121
6.9	Two Phase AC Servomotor	122
6.10	Potentiometer	125
6.11	Tachometers.....	126
6.12	Synchro	127
6.13	Position Control System.....	131
	<i>Student's Assignments-1</i>	134
	<i>Student's Assignments-2</i>	136

Chapter 7

Time Domain Analysis

of Control Systems.....142

7.1	Introduction	142
7.2	Transient and Steady State Response.....	142
7.3	Steady State Error.....	144
7.4	Static Error Coefficients.....	145
7.5	Dynamic (or generalised) Error Coefficients...	155
7.6	Relationship between Static and Dynamic Error Constants.....	156
7.7	Transients State Analysis	160
7.8	Dominant Poles of Transfer Functions.....	198
	<i>Student's Assignments-1</i>	208
	<i>Student's Assignments-2</i>	217

Chapter 8

Stability Analysis of Linear

Control Systems222

8.1	The Concept of Stability	222
	<i>Student's Assignments-1</i>	244
	<i>Student's Assignments-2</i>	246

Chapter 9

The Root Locus Technique251

9.1	Introduction	251
9.2	Angle and Magnitude Conditions.....	252
9.3	Construction Rules of Root Locus	253

9.4	Gain Margin and Phase Margin from Root Locus Plot.....	263
9.5	Effects of Adding Poles and Zeros to $G(s)H(s)$	278
9.6	Complementary Root Locus (CRL) or Inverse Root Locus (IRL).....	279
	<i>Student's Assignments-1</i>	282
	<i>Student's Assignments-2</i>	285

Chapter 10

Frequency Domain Analysis

of Control Systems.....292

10.1	Introduction	292
10.2	Advantages of Frequency Response.....	292
10.3	Frequency Response Analysis of Second Order Control System.....	293
10.4	Frequency-Domain Specifications.....	295
10.5	Correlation between Step Response & Frequency Response in the Standard Order System.....	297
10.6	Frequency Domain Analysis of Dead Time or Transportation Lag Elements.....	300
10.7	Relative Stability: Gain Margin and Phase Margin	302
10.8	Gain Margin and Phase Margin for Second Order Control System.....	303
10.9	Graphical Methods of Frequency Domain Analysis.....	310
10.10	Polar Plots	310
10.11	Stability from Polar Plots	318
10.12	Effect of (Open Loop) Gain on Stability.....	320
10.13	Gain Phase Plot	320
10.14	Theory of Nyquist Criterion	322
10.15	Bode Plots.....	340
10.16	Basic Factors of $G(j\omega)H(j\omega)$	341
10.17	General Procedure for Constructing the Bode Plots	347
	<i>Student's Assignments-1</i>	358
	<i>Student's Assignments-2</i>	363

Chapter 11

Industrial Controllers

and Compensators368

11.1	Introduction to Compensators.....	368
11.2	Lead Compensator	369
11.3	Lag Compensator.....	370
11.4	Lag-Lead Compensator.....	371
11.5	Comparison of Lead and Lag Compensators...	372
11.6	Bode Plot for Lag Lead Compensator	373
11.7	Industrial Controllers	380
11.8	Proportional (P) Controller.....	380
11.9	Integral (I) Controller (Reset Mode)	381
11.10	Derivative (D) Controller (Rate Mode)	383
11.11	Proportional Integral (P-I) Controller	384
11.12	Proportional Derivative (P-D) Controller.....	385

11.13	Proportional Integral Derivative (P-I-D)
-------	--

Controller	386
------------------	-----

11.14	Op-Amp Based Realisation of Controllers.....	386
-------	--	-----

<i>Student's Assignments-1</i>	394
--------------------------------------	-----

<i>Student's Assignments-2</i>	395
--------------------------------------	-----

Chapter 12

State Variable Analysis398

12.1	Introduction	398
------	--------------------	-----

12.2	State Space Representation of Control System.....	398
------	--	-----

12.3	Solution of State Equations	413
------	-----------------------------------	-----

12.4	Controllability and Observability	423
------	---	-----

<i>Student's Assignments-1</i>	429
--------------------------------------	-----

<i>Student's Assignments-2</i>	432
--------------------------------------	-----



Transfer Function

2.1 Transfer Function and Impulse Response Function

In control theory, transfer functions are commonly used to characterise the input-output relationships of components or systems that can be described by linear, time-invariant differential equations.

Transfer Function

The transfer function of a linear, time-invariant, differential equation system is defined as the ratio of the Laplace transform of the output (response function) to the Laplace transform of the input (driving function) under the assumption that all initial conditions are zero.

Linear Systems

A system is called linear if the principle of superposition and principle of homogeneity apply. The principle of superposition states that the response produced by the simultaneous application of two different forcing functions is the sum of the two individual responses. Hence, for the linear system, the response to several inputs can be calculated by transferring one input at a time and adding the results. It is the principle that allows one to build up complicated solutions to the linear differential equations from simple solutions.

In an experimental investigation of a dynamic system, if cause and effect are proportional, thus implying that the principle of superposition holds, then the system can be considered as linear.

Linear Time-Invariant Systems and Linear-Time Varying Systems

A differential equation is linear if the coefficients are constants or functions only of the independent variable. Dynamic systems that are composed of linear time-invariant lumped-parameter components may be described by linear time-invariant differential equations i.e. constant-coefficient differential equations. Such systems are called linear time-invariant (or linear constant-coefficient) systems. Systems that are represented by differential equations whose coefficients are function of time are called linear time varying systems. An example of a time-varying control system is a space craft control system (the mass of a space craft changes due to fuel consumption).

The definition of transfer function is easily extended to a system with multiple inputs and outputs (i.e. a multivariable system). In a multivariable system, a linear differential equation may be used to describe the relationship between a pair of input and output variables, when all other inputs are set to zero. Since the principle of superposition is valid for linear systems, the total effect (on any output) due to all the inputs acting simultaneously is obtained by adding up the outputs due to each input acting alone.

Example-2.1

When deriving the transfer function of a linear element

- (a) both initial conditions and loading are taken into account
- (b) initial conditions are taken into account but the element is assumed to be not loaded.
- (c) initial conditions are assumed to be zero but loading is taken into account
- (d) initial conditions are assumed to be zero and the element is assumed to be not loaded.

Solution: (c)

While deriving the transfer function of a linear element only initial conditions are assumed to be zero, loading (or input) can't assume to be zero.

Example-2.2

If the initial conditions for a system are inherently zero, what does it physically

mean?

- (a) The system is at rest but stores energy
- (b) The system is working but does not store energy
- (c) The system is at rest or no energy is stored in any of its part
- (d) The system is working with zero reference input

Solution: (c)

A system with zero initial conditions is said to be at rest since there is no stored energy.

Example-2.3

What are the properties of linear systems not valid for non-linear systems?

Explain each briefly?

Solution:

- Linear systems satisfy properties of superposition and homogeneity. Any system that does not satisfy these properties is non-linear.

Property of superposition: When the output corresponding to V_{in_1} is V_{out_1} and the output corresponding to V_{in_2} is V_{out_2} then the output corresponding to $aV_{in_1} + bV_{in_2}$ is $aV_{out_1} + bV_{out_2}$.

Property of homogeneity: It states that for a given input x in the domain of the function f and for any real number k

$$f(kx) = kf(x)$$

- Linear systems have one equilibrium point at the origin. Non-linear systems may have many equilibrium points.

2.2 Standard Test Signals

1. Step Signal


$$r(t) = A u(t)$$

where,

$$u(t) = \begin{cases} 1, & t > 0 \\ 0, & t < 0 \end{cases}$$

Laplace transform,

$$R(s) = A/s$$

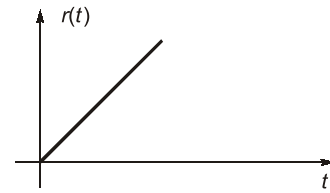


2. Ramp Signal

$$r(t) = \begin{cases} At & t > 0 \\ 0 & t < 0 \end{cases}$$

Laplace transform,

$$R(s) = A/s^2$$

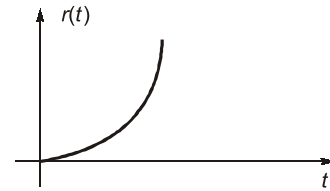


3. Parabolic Signal

$$r(t) = \begin{cases} At^2/2 & , t > 0 \\ 0 & , t < 0 \end{cases}$$

Laplace transform,

$$R(s) = A/s^3$$



4. Impulse Signal

$$r(t) = \begin{cases} \infty & , t = 0 \\ 0 & , t \neq 0 \end{cases} ; \int_{-\infty}^{+\infty} \delta(t) dt = 1$$

Laplace transform,

$$R(s) = 1$$

Transfer function,

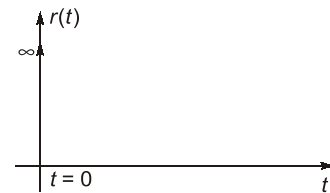
$$G(s) = \frac{C(s)}{R(s)}$$

Let,

$$C(s) = F(s) R(s)$$

$$R(s) = \text{Impulse signal} = 1$$

$$C(s) = \text{Impulse response} = G(s) \times 1 = \text{T.F.}$$



$$\mathcal{L}\{\text{Impulse Response}\} = \text{Transfer function} = \left[\frac{C(s)}{R(s)} \right]$$



NOTE

- d/dt (Parabolic Response) = Ramp Response
- d/dt (Ramp Response) = Step Response
- d/dt (Step Response) = Impulse Response

Consider, a linear time-invariant system has the input $u(t)$ and output $y(t)$. The system can be characterized by its impulse response $g(t)$, which is defined as the output when the input is a unit-impulse function $\delta(t)$. Once the impulse response of a linear system is known, the output of the system $y(t)$, with any input $u(t)$, can be found by using the transfer function.

Let $G(s)$ denotes the transfer function of a system with input $u(t)$, output $y(t)$, and impulse response $g(t)$. The transfer function $G(s)$ is defined as

$$G(s) = \mathcal{L}[g(t)] = \frac{\mathcal{L}[y(t)]}{\mathcal{L}[u(t)]} \Big|_{\text{initial conditions} \rightarrow 0} = \frac{Y(s)}{U(s)}$$



Remember

Sometimes, students do a common mistake, they first find $y(t)/u(t)$ and then take its Laplace transform to determine the transfer function which is absolutely wrong. Because,

$$G(s) = \frac{Y(s)}{U(s)} = \frac{\mathcal{L}[y(t)]}{\mathcal{L}[u(t)]} \neq \mathcal{L}\left[\frac{y(t)}{u(t)}\right]$$

2.3 Poles and Zeros of a Transfer Function

The transfer function of a linear control system can be expressed as

$$G(s) = \frac{A(s)}{B(s)} = \frac{K(s - s_1)(s - s_2) \dots (s - s_n)}{(s - s_a)(s - s_b) \dots (s - s_m)}$$

where K is known as gain factor of the transfer function $G(s)$.

In the transfer function expression, if s is put equal to $s_a, s_b \dots s_m$ then it is noted that the value of the transfer function is infinite. These $s_a, s_b \dots s_m$ are called the poles of the transfer function.

In the transfer function expression, if s is put equal to $s_1, s_2 \dots s_n$ then it is noted that the value of the transfer function is zero. These $s_1, s_2 \dots s_n$ are called the zeros of the transfer function.

Multiple Poles and Multiple Zeros

The poles $s_a, s_b \dots s_m$ or the zeros $s_1, s_2 \dots s_n$ are either real or complex and the complex poles or zeros always appear in conjugate pairs.

It is possible that either poles or zeros may coincide; such poles or zeros are called multiple poles or multiple zeros.

Simple Poles and Simple Zeros

Non-coinciding poles or zeros are called simple poles or simple zeros. From the transfer function expression, it is observed that

- If $n > m$, then the value of transfer function is found to be infinity for $s = \infty$. Hence, it is concluded that there exists a pole of the transfer function at infinity (∞) and the multiplicity (order) of such a pole being $(n - m)$.
- If $n < m$, then the value of transfer function is found to be zero for $s = \infty$. Hence, it is concluded that there exists a zero of the transfer function at infinity (∞) and the multiplicity (order) of such a zero being $(m - n)$.

Therefore, for a rational transfer function the total number of zeros is equal to the total number of poles.

The transfer function of a system is completely specified in terms of its poles, zeros and the gain factor.

Consider the following transfer function:

$$G(s) = \frac{s + 3}{(s + 2)(s + 1 + 3j)(s + 1 - 3j)}$$

For the above transfer function, the poles are at

(a) $s_a = -2$ (b) $s_b = -1 - 3j$ and (c) $s_c = -1 + 3j$

The zeros are at $s_1 = -3$.

As the number of zeros should be equal to number of poles, the remaining two zeros are located at $s = \infty$.

The pole-zero plot is plotted as shown:

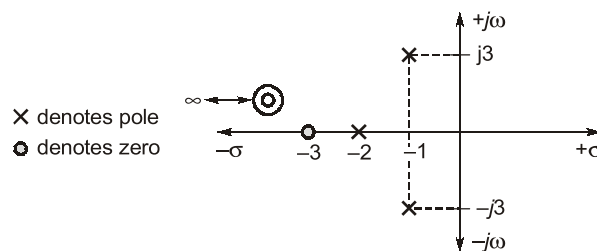


Figure-2.1: Pole-zero plot

Poles and zero are those complex/critical frequencies which make the transfer function infinity or zero.

Proper Transfer Functions

The transfer functions are said to be strictly proper if the order of the denominator polynomial is greater than that of the numerator polynomial (i.e. $m > n$). If $m = n$, the transfer function is called proper. The transfer function is improper if $n > m$.

In the transfer function expression of a control system, the highest power of s in the numerator is generally either equal to or less than that of the denominator.

Example-2.4

A transfer function has two zeros at infinity. Then the relation between the numerator degree (N) and the denominator degree (M) of the transfer function is

(a) $N = M + 2$

(b) $N = M - 2$

(c) $N = M + 1$

(d) $N = M - 1$

Solution: (b)

For a rational transfer function the total number of zeros are equal to total number of poles.

Therefore, Number of poles = M ; Number of zeros = $N + 2$

For a rational transfer function: $M = N + 2$ or $N = M - 2$

2.4 Properties of Transfer Function

The properties of the transfer function are summarized as follows:

1. The transfer function is defined only for a linear time-invariant system. It is not defined for non-linear or time variant systems.
2. The transfer function between an input variable and an output variable of a system is defined as the Laplace transform of the impulse response. Alternately, the transfer function between a pair of input and output variables is the ratio of the Laplace transform of the output to the Laplace transform of the input.
3. All initial conditions of the system are set to zero.
4. Transfer function is independent of the input of the system.
5. The transfer function of a continuous-data system is expressed only as a function of the complex variables. It is not a function of the real variable, time, or any other variable that is used as the independent variable or discrete-data system modelled by difference equations, the transfer function is a function of Z , when the Z -transform is used.
6. If the system transfer function has no poles or zeros with positive real parts, the system is a **minimum phase system**.
Non-minimum phase functions are the functions which have poles or zeros on right hand side of s -plane.
7. The stability of a time-invariant linear system can be determined from its characteristic equation.

Characteristic equation: The characteristic equation of a linear system is defined as the equation obtained by setting the denominator polynomial of the closed loop transfer function to zero.

Example-2.5

State and explain minimum phase and non-minimum phase transfer functions with examples.

Solution:

Minimum phase transfer function:

⇒ Transfer functions which have all poles and zeros in the left half of the s -plane i.e. system having no poles and zeros in the RHS of the s -plane are minimum phase transfer functions.

⇒ On the otherhand, a transfer function which has one or more zeros in the right half of s-plane is known as “**non-minimum phase transfer function**”.

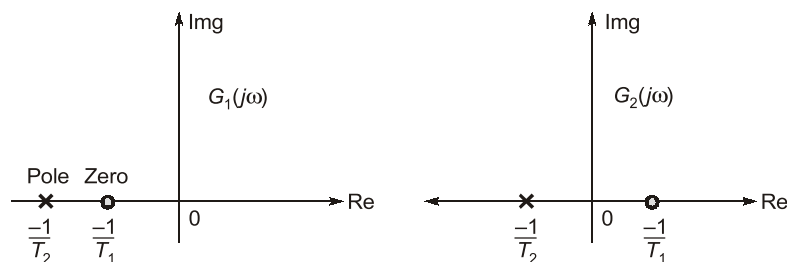
Let
$$G_1(s) = \frac{1 + sT_1}{1 + sT_2}$$

⇒
$$G_1(j\omega) = \frac{1 + j\omega T_1}{1 + j\omega T_2} \quad \dots(i)$$

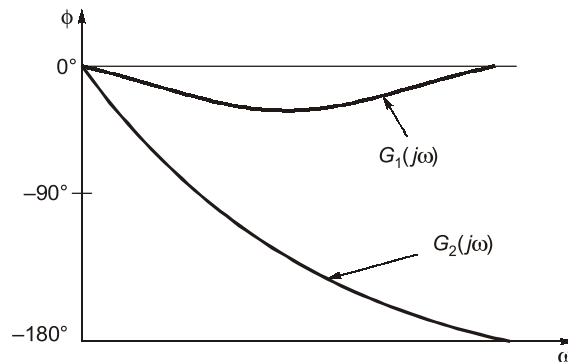
and
$$G_2(j\omega) = \frac{1 - j\omega T_1}{1 + j\omega T_2} \quad \dots(ii)$$

The transfer function given by equation (i) represents the minimum-phase transfer function and equation (ii) represents the non-minimum phase transfer function .

⇒ The pole-zero configuration of above transfer function as given by equation (i) and (ii) may be drawn as:



⇒ The **minimum phase function** has unique relationship between its phase and magnitude curves. Typical phase angle characteristics are shown below:



⇒ It will be seen that larger the phase lags present in a system, the more complex are its stabilization problems. Therefore in control systems, elements with non minimum phase transfer function are avoided as far as possible.

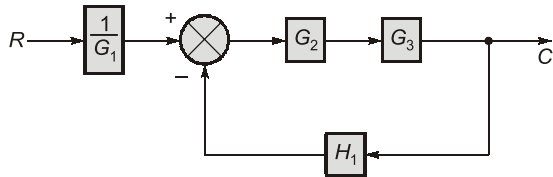
⇒ A common example of a non-minimum phase system is “**transportation lag**” which has the transfer function,

$$\begin{aligned} G(j\omega) &= e^{-j\omega T} = 1 \angle -\omega T \text{ Radian} \\ &= 1 \angle -57.3 \omega T \text{ degree} \end{aligned}$$



Student's Assignments | **1**

Q.1 A feedback control system is shown below . Find the transfer function for this system.



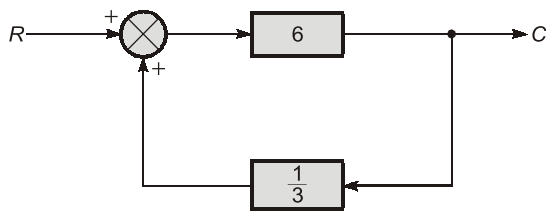
Q.2 The step response of a system is given as

$$y = 1 - \frac{7}{3}e^{-t} + \frac{3}{2}e^{-2t} - \frac{1}{6}e^{-4t}$$

If the transfer function of this system is $\frac{(s+a)}{(s+b)(s+c)(s+d)}$ then $a + b + c + d$ is _____.

Q.3 A system has the transfer function $\frac{(1-s)}{(1+s)}$. Its gain at $\omega = 1$ rad/sec is _____.

Q.4 The close loop gain of the system shown below is



Student's Assignments | **1** | **Explanations**

1. $\left(\frac{G_2 G_3}{G_1(1 + H_1 G_2 G_3)} \right)$

Multiply G_2 and G_3 and apply feedback formula and then again multiply with $\frac{1}{G_1}$

$$T(s) = \frac{G_2 G_3}{G_1(1 + G_2 G_3 H_1)}$$

2. (15)

$$y = 1 - \frac{7}{3}e^{-t} + \frac{3}{2}e^{-2t} - \frac{1}{6}e^{-4t}$$

$$p(t) = \frac{dy}{dt}$$

$$= \frac{7}{3}e^{-t} + \frac{3}{2} \times (-2) \times e^{-2t} - \left(\frac{1}{6}\right) (-4)e^{-4t}$$

Laplace transform of p(t)

$$p(s) = \frac{7/3}{s+1} + \frac{-3}{s+2} + \frac{2/3}{s+4}$$

$$= \frac{s+8}{(s+1)(s+2)(s+4)}$$

$$\Rightarrow a + b + c + d = 15$$

3. (1)

For all pass system, gain = '1' at all frequencies.

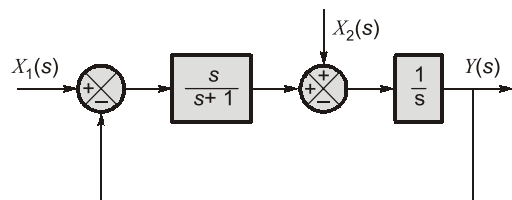
4. (-6)

$$\text{C.L.T.F.} = \frac{6}{1-6 \times \frac{1}{3}} = \frac{6}{-1} = -6$$



Student's Assignments | **2**

Q.1 For the following system,



when $X_1(s) = 0$, the transfer function $\frac{Y(s)}{X_2(s)}$ is

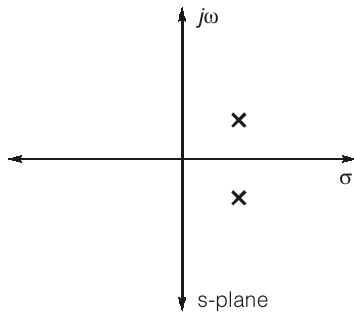
(a) $\frac{s+1}{s^2}$

(b) $\frac{1}{s+1}$

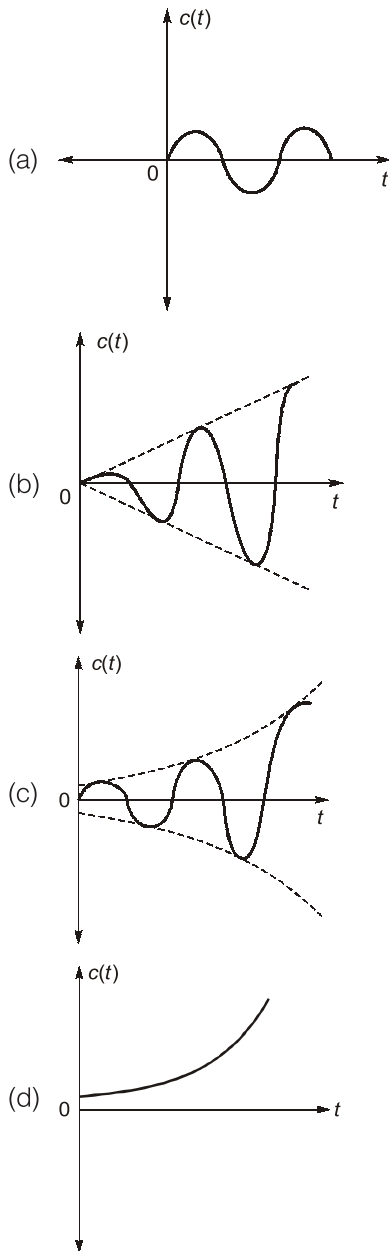
(c) $\frac{s+2}{s(s+1)}$

(d) $\frac{s+1}{s(s+2)}$

Q.2 If closed-loop transfer function poles shown below



Impulse response is



Q.3 The impulse response of several continuous systems are given below. Which is/are stable?

1. $h(t) = te^{-t}$
 2. $h(t) = 1$
 3. $h(t) = e^{-t} \sin 3t$
 4. $h(t) = \sin \omega t$
- (a) 1 only (b) 1 and 3
(c) 3 and 4 (d) 2 and 4

Q.4 Ramp response of the transfer function

$$F(s) = \frac{s+1}{s+2} \text{ is}$$

- (a) $\frac{1}{4} - \frac{1}{4}e^{-2t} + \frac{1}{2}t$ (b) $\frac{1}{4}e^{-2t} + \frac{1}{4} + \frac{1}{2}t$
(c) $\frac{1}{2} - \frac{1}{2}e^{-2t} + t$ (d) $\frac{1}{2}e^{-2t} + \frac{1}{2} - t$

Q.5 Which of the following statements are correct?

1. Transfer function can be obtained from the signal flow graph of the system.
 2. Transfer function typically characterizes to linear time invariant systems.
 3. Transfer function gives the ratio of output to input in frequency domain of the system.
- (a) 1 and 2 (b) 2 and 3
(c) 1 and 3 (d) 1, 2 and 3

Q.6 Which of the following is not a desirable feature of a modern control system?

- (a) Quick response
- (b) Accuracy
- (c) Correct power level
- (d) Oscillations

Q.7 In regenerating feedback, the transfer function is given by

- (a) $\frac{C(s)}{R(s)} = \frac{G(s)}{1+G(s)H(s)}$
- (b) $\frac{C(s)}{R(s)} = \frac{G(s)H(s)}{1-G(s)H(s)}$
- (c) $\frac{C(s)}{R(s)} = \frac{G(s)H(s)}{1+G(s)H(s)}$
- (d) $\frac{C(s)}{R(s)} = \frac{G(s)}{1-G(s)H(s)}$

The transfer function

$$T(s) = \frac{Y(s)}{X_2(s)} = \frac{G(s)}{1 + G(s)H(s)} \quad \dots(i)$$

Here, $G(s) = \frac{1}{s}$ and $H(s) = \frac{s}{s+1}$

$$\frac{Y(s)}{X_2(s)} = \frac{1/s}{1 + \frac{1}{s} \times \frac{s}{s+1}} = \frac{(s+1)}{s(s+2)}$$

2. (c)

$$\begin{aligned} \text{T.F.} &= \frac{1}{[s - (\sigma + j\omega)][s - (\sigma - j\omega)]} \\ &= \frac{1}{[(s - \sigma) - j\omega][(s - \sigma) + j\omega]} \\ &= \frac{1}{[(s - \sigma)^2 - (j\omega)^2]} = \frac{1}{[(s - \sigma)^2 + \omega^2]} \end{aligned}$$

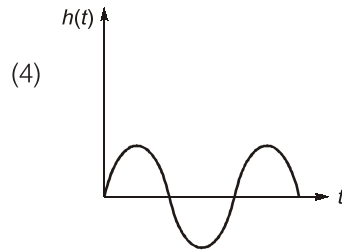
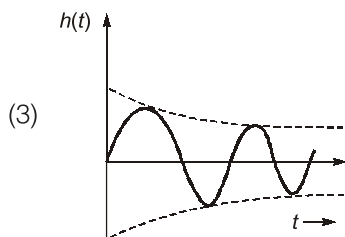
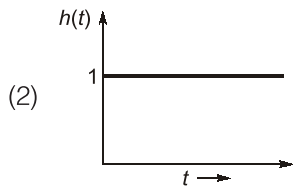
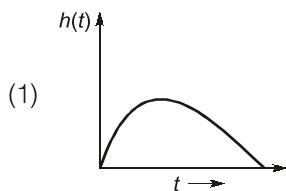
For impulse response, taking its inverse Laplace transformation we get,

$$c(t) = e^{\sigma t} \sin \omega t$$

hence option (c) is correct.

3. (b)

If the impulse response decays to zero as time approaches infinity, the system is stable.



4. (a)

$$\frac{C(s)}{R(s)} = \frac{s+1}{s+2}$$

$$\begin{aligned} \therefore C(s) &= R(s) \cdot \frac{s+1}{s+2} \\ &= \frac{1}{s^2} \cdot \frac{s+1}{s+2} = \frac{1}{s^2} \left(1 - \frac{1}{s+2} \right) \\ &= \frac{1}{s^2} - \frac{1}{s^2(s+2)} \end{aligned}$$

$$\frac{1}{s^2} \cdot \left(\frac{s+1}{s+2} \right) = \frac{A}{s} + \frac{B}{s^2} + \frac{C}{s+2}$$

$$\begin{aligned} s+1 &= As(s+2) + B(s+2) + Cs^2 \\ &= As^2 + 2As + Bs + 2B + Cs^2 \end{aligned}$$

$$\therefore A + C = 0, 2A + B = 1 \text{ and } 2B = 1$$

$$\therefore A = \frac{1}{2}, B = \frac{1}{4}, C = -\frac{1}{4}$$

$$\therefore \frac{C(s)}{R(s)} = \frac{1}{4s} + \frac{1}{2s^2} + \left(-\frac{1}{4} \right) \frac{1}{s+2}$$

$$= \frac{1}{4}u(t) + \frac{1}{2}tu(t) - \frac{1}{4}e^{-2t}u(t)$$

5. (d)

- (i) Transfer function can be obtained from signal flow graph of the system.
- (ii) Transfer function typically characterizes to LTI systems.
- (iii) Transfer function gives the ratio of output to input in s-domain of system.

$$\text{TF} = \frac{\mathcal{L}[\text{Output}]}{\mathcal{L}[\text{Input}]} \Big|_{\text{Initial conditions} = 0}$$