



**MADE EASY**

India's Best Institute for IES, GATE & PSUs

Delhi | Bhopal | Hyderabad | Jaipur | Pune | Bhubaneswar | Kolkata

Web: [www.madeeasy.in](http://www.madeeasy.in) | E-mail: [info@madeeasy.in](mailto:info@madeeasy.in) | Ph: 011-45124612

# SIGNALS AND SYSTEMS

EC + EE

Date of Test : 31/08/2023

## ANSWER KEY >

- |        |         |         |         |         |
|--------|---------|---------|---------|---------|
| 1. (b) | 7. (c)  | 13. (c) | 19. (a) | 25. (c) |
| 2. (c) | 8. (c)  | 14. (d) | 20. (d) | 26. (a) |
| 3. (d) | 9. (d)  | 15. (a) | 21. (d) | 27. (c) |
| 4. (b) | 10. (a) | 16. (d) | 22. (b) | 28. (b) |
| 5. (b) | 11. (b) | 17. (d) | 23. (b) | 29. (a) |
| 6. (b) | 12. (a) | 18. (b) | 24. (c) | 30. (d) |

## DETAILED EXPLANATIONS

1. (b)

Given,

$$x(t) \xleftrightarrow{FS} c_k$$

$$x(t+a) \xleftrightarrow{FS} e^{j a k \omega_0} c_k$$

Put  $a = 2$ 

$$x(t+2) \xleftrightarrow{FS} e^{j 2 k \omega_0} c_k$$

$$x(-t) \xleftrightarrow{FS} c_{-k}$$

$$x(-t+2) \xleftrightarrow{FS} e^{j 2 k \omega_0} c_{-k}$$

2. (c)

Given,

$$\int_{-2}^2 (t-3) \delta(2t+2) dt$$

From the property of impulse  $\delta(at+b) = \frac{1}{|a|} \delta\left(t + \frac{b}{a}\right)$

$$= \frac{1}{2} \int_{-2}^2 (t-3) \delta(t+1) dt$$

from  $\int_{t_1}^{t_2} x(t) \delta(t-t_0) dt = x(t_0); \quad t_1 < t_0 < t_2$

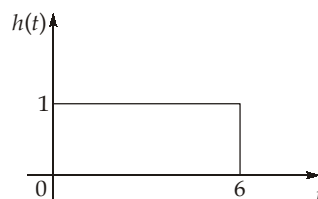
Clearly we can write,

$$= \frac{1}{2} (-1-3) = -2$$

3. (d)

Given,

$$h(t) = u(t) - u(t-6)$$



$$y(t) = \int_{\tau=-\infty}^{\infty} x(\tau) h(t-\tau) d\tau$$

$$y(2) = \int_{\tau=0}^2 x(\tau) h(2-\tau) d\tau$$

$$= \int_{\tau=0}^2 \left( \frac{1}{2} \tau \right) \cdot 1 d\tau \quad \left\{ \because x(\tau) = \frac{1}{2} \tau \text{ from given diagram} \right\}$$

$$= \int_{\tau=0}^2 \frac{1}{2} \tau d\tau = \frac{\tau^2}{4} \Big|_0^2 = 1$$

4. (b)

5. (b)

For DFT, the total number of multiplications =  $N^2 = 64$   
 (Given,  $N = 8$ )

For FFT, the total number of multiplications =  $\frac{N}{2} \log_2 N = \frac{8}{2} \log_2 8 = 12$

6. (b)

$\because x[n]$  is real and odd, the Fourier transform  $X(e^{j\omega})$  will be purely Imaginary and odd function.  
 Thus  $\text{Re}\{X(e^{j\omega})\} = 0$  and the discrete time sequence corresponding to  $\text{Re}\{X(e^{j\omega})\} = 0$ .

7. (c)

Given,  $H(\omega) = -2j\omega$

From the definition of inverse fourier transform,

$$x(t) = \frac{1}{2\pi} \int_{-\infty}^{\infty} X(\omega) e^{j\omega t} d\omega$$

differentiate both sides,

$$\frac{dx(t)}{dt} = \frac{1}{2\pi} \int_{-\infty}^{\infty} j\omega X(\omega) e^{j\omega t} d\omega$$

$$-2 \frac{dx(t)}{dt} = \frac{1}{2\pi} \int_{-\infty}^{\infty} \underbrace{-2j\omega}_{H(\omega)} X(\omega) e^{j\omega t} d\omega$$

$\therefore$  Passing  $x(t)$  through  $H(\omega)$  is equivalent to perform  $-2 \frac{dx(t)}{dt}$

$$\therefore y(t) = -2 \frac{dx(t)}{dt}$$

given,  $x(t) = e^{jt}$

$$\therefore y(t) = -2 \frac{d}{dt} [e^{jt}]$$

$$y(t) = -2je^{jt}$$

8. (c)

From the pole-zero plot, it is shown that  $r < 1$ , so that the signal is a decaying signal.

9. (d)

Given impulse response,

$$\begin{aligned}
 h[n] &= \left\{ p, \underset{\uparrow}{q}, p \right\} = p e^{j\omega} + q + p e^{-j\omega} \\
 H(e^{j\omega}) &= 2p \cos \omega + q \\
 &= q + 2p \cos(2\pi f) \quad \dots(i)
 \end{aligned}$$

Given,  $H(e^{j2\pi f}) = 0$  at  $f = \frac{1}{4}$  Hz and  $H(e^{j2\pi f}) = 1$  at  $f = \frac{1}{8}$  Hz

From equation (i),

$$0 = q + 2p \cos\left(\frac{2\pi}{4}\right)$$

$$0 = q + 2p \cos\left(\frac{\pi}{2}\right)$$

$$\therefore q = 0$$

$$1 = q + 2p \cos\left(\frac{2\pi}{8}\right)$$

$$1 = q + 2p \cos\left(\frac{\pi}{4}\right)$$

$$1 = q + 2p \cdot \frac{1}{\sqrt{2}}$$

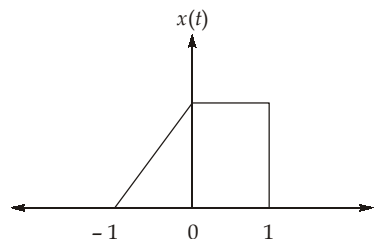
$$\therefore q = 0 \Rightarrow 1 = p \cdot \sqrt{2} \Rightarrow p = \frac{1}{\sqrt{2}}$$

$$\therefore h[n] = \left\{ 0.707, \underset{\uparrow}{0}, 0.707 \right\}$$

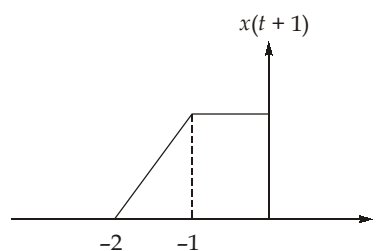
$$\therefore \text{DC gain } H(e^{j0}) = \sum_{n=-1}^1 h[n] = 0.707 + 0 + 0.707$$

$$\therefore H(e^{j0}) = 1.414$$

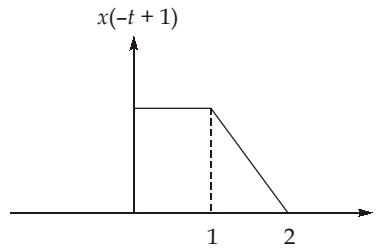
10. (a)

 $x(t)$ 

By time shifting



By time reversal



11. (b)

$$X(s) - \frac{3H(s)}{s^2} = H(s)$$

$$\Rightarrow X(s) = \left(1 + \frac{3}{s^2}\right)H(s)$$

$$\bullet \quad 2H(s) + \frac{H(s)}{s} = Y(s)$$

$$\Rightarrow \left(2 + \frac{1}{s}\right)H(s) = Y(s)$$

$$\Rightarrow \left(2 + \frac{1}{s}\right) \frac{X(s)}{\left(1 + \frac{3}{s^2}\right)} = Y(s)$$

$$\Rightarrow \frac{Y(s)}{X(s)} = \frac{2 + \frac{1}{s}}{\frac{3}{s^2} + 1} = \frac{s + 2s^2}{3 + s^2}$$

$$\Rightarrow \frac{d^2y(t)}{dt^2} + 3y(t) = \frac{dx(t)}{dt} + 2 \frac{d^2x(t)}{dt^2}$$

12. (a)

$$x(t) = \sum_{m=-\infty}^{\infty} \delta(t-3m) + \delta(t-1-3m) - \delta(t-2-3m)$$

The period of  $x(t)$  is  $T = 3$ . The fundamental frequency,

$$\omega_0 = \frac{2\pi}{T} = \frac{2\pi}{3}$$

Let  $a_k$  represents the complex Fourier series coefficient for  $x(t)$ .

$$a_k = \frac{1}{3} \int_0^3 [\delta(t) + \delta(t-1) - \delta(t-2)] \cdot e^{\frac{-jk2\pi t}{3}} \cdot dt$$

$$a_k = \frac{1}{3} \left( 1 + e^{\frac{-jk2\pi}{3}} - e^{\frac{-jk4\pi}{3}} \right)$$

$$\text{For } k = 3, \quad a_3 = \frac{1}{3} (1 + e^{-j2\pi} - e^{-j4\pi}) = \frac{1}{3}$$

The frequency response of the LTI system is given by,

$$H(j\omega) = e^{j\omega/4} - e^{-j\omega/4} = 2j \sin\left(\frac{\omega}{4}\right)$$

If  $C_k$  is the complex Fourier series coefficient of  $y(t)$ , then

$$C_k = H\left(\frac{j2\pi k}{3}\right) a_k$$

$$C_k = \left(j2 \sin \frac{2\pi k}{12}\right) a_k$$

Hence,

$$C_3 = \left(j2 \sin \frac{\pi}{2}\right) \times \frac{1}{3} = \frac{j2}{3}$$

13. (c)

The fourier transform can be written as:

$$X(j\omega) = |X(j\omega)| \angle X(j\omega)$$

$$X(j\omega) = \begin{cases} j3\omega, & |\omega| < 3\pi \\ 0, & \text{otherwise} \end{cases}$$

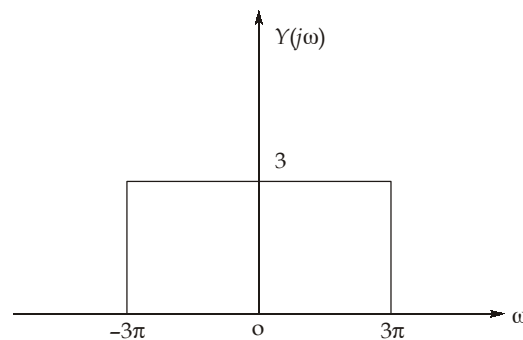
Let

$$Y(j\omega) = \begin{cases} 3, & |\omega| < 3\pi \\ 0, & \text{otherwise} \end{cases}$$

$X(j\omega)$  is  $j\omega$  times  $Y(j\omega)$ . Hence,

$$x(t) = \frac{dy(t)}{dt}$$

We have,



$$A \operatorname{rect}\left(\frac{t}{T}\right) \xleftrightarrow{FT} \frac{AT \sin\left(\frac{\omega T}{2}\right)}{\left(\frac{\omega T}{2}\right)}$$

Using duality property,

$$\frac{AT \sin\left(\frac{tT}{2}\right)}{\left(\frac{tT}{2}\right)} \xleftrightarrow{FT} 2\pi A \operatorname{rect}\left(\frac{\omega}{T}\right)$$

$$\frac{A}{\pi t} \sin\left(\frac{tT}{2}\right) \xleftrightarrow{FT} A \operatorname{rect}\left(\frac{\omega}{T}\right)$$

For  $T = 6\pi$  and  $A = 3$ ,

$$\frac{3}{\pi t} \sin(3\pi t) \xrightarrow{FT} 3 \operatorname{rect}\left(\frac{\omega}{6\pi}\right)$$

Hence, 
$$y(t) = \frac{3 \sin(3\pi t)}{\pi t}$$

$\therefore$  
$$x(t) = \frac{d}{dt} y(t) = \frac{3}{\pi t^2} (3\pi t \cos 3\pi t - \sin 3\pi t).$$

14. (d)

From the given data, we can write

$$\begin{aligned} X(z) &= \frac{kz^2}{(z - e^{j\pi/2})(z - e^{-j\pi/2})} \\ &= \frac{kz^2}{\left[ z - \left( \cos \frac{\pi}{2} + j \sin \frac{\pi}{2} \right) \right] \left[ z - \left( \cos \frac{\pi}{2} - j \sin \frac{\pi}{2} \right) \right]} \end{aligned}$$

$$X(z) = \frac{kz^2}{(z - j1)(z + j1)}$$

It is given,  $X(1) = 1$

i.e., 
$$X(1) = \frac{k}{(1 - j1)(1 + j1)}$$

$$\frac{k}{1+1} = 1 \Rightarrow k = 2$$

$\therefore$  
$$X(z) = \frac{2z^2}{(z^2 + 1)} \text{ ROC is } |z| > 1$$

15. (a)

$$x(t) = \sum_{n=-\infty}^{\infty} e^{-(2t-n)} u(2t-n)$$

Let  $x(t)$  be periodic with period  $T$ .

$$\begin{aligned} x(t + T) &= \sum_{n=-\infty}^{\infty} e^{-(2(t+T)-n)} u(2(t+T)-n) \\ &= \sum_{n=-\infty}^{\infty} e^{-(2t+2T-n)} u(2t+2T-n) \\ &= x(t) \end{aligned}$$

i.e.  $2T - n = -m$

Thus,  $x(t)$  is periodic if,

$$2T - n = -m$$

$$T = \frac{n-m}{2}, \text{ Thus } T_{\min} = \frac{1}{2}$$

$$x(t) = \begin{cases} \sum_{n=-\infty}^{\infty} e^{-(2t-n)}, & t > n/2 \\ 0, & \text{otherwise} \end{cases}$$

$$x(t) = \sum_{n=-\infty}^0 \exp(-(2t-n)), \quad 0 < t < \frac{1}{2}$$

$$= e^{-2t} \sum_{n=-\infty}^0 e^n = e^{-2t} \sum_{n=0}^{\infty} (e^{-1})^n$$

$$x(t) = \frac{e^{-2t}}{1-e^{-1}}, \quad 0 < t < \frac{1}{2}$$

$$P_X = \frac{1}{T} \int_0^T |x(t)|^2 dt$$

$$= 2 \int_0^{1/2} \left[ \frac{e^{-2t}}{1-e^{-1}} \right]^2 dt = \frac{2}{(1-e^{-1})^2} \int_0^{1/2} e^{-4t} dt = \frac{1}{2(1-e^{-1})^2} \cdot (1-e^{-2})$$

$$= 1.082 \text{ W}$$

16. (d)

By using convolution property,

$$y_1(t) = \int_{-\infty}^{\infty} x_1(\tau)h(t-\tau)d\tau$$

From the given first fact,

at  $t = 5$

$$y_1(5) = \int_{-\infty}^{\infty} x_1(\tau)h(5-\tau)d\tau$$

$$y_1(5) = A \int_{5-T}^5 x_1(\tau)d\tau = 0$$

if the lower limit is equal to 1, then the area of the triangle between  $\tau = 1$  and  $\tau = 3$  is 2 and cancels the area of the rectangle between  $\tau = 4$  and  $\tau = 5$ .

Hence, the value for  $T$  should be 4.

$$y_2(t) = \int_{-\infty}^{\infty} x_2(\tau)h(t-\tau)d\tau$$

$$= A \int_{t-T}^t x_2(\tau)d\tau$$

$$y_2(t)|_{t=9} = A \int_5^9 x_2(\tau)d\tau \quad (\text{given } t=9)$$

from the second fact, we have



$$\begin{aligned}
 y_2(t) |_{t=9} = 9 &= A \int_5^9 x_2(\tau) d\tau \\
 &= A \int_5^9 \sin\left(\frac{\pi\tau}{3}\right) d\tau \\
 &= -\frac{A}{\pi/3} \cos\left(\frac{\pi\tau}{3}\right) \Big|_5^9 \\
 9 &= \frac{9A}{2\pi}
 \end{aligned}$$

∴  $A = 2\pi$   
 ∴ The value of  $A \times T = 2\pi \times 4 = 8\pi = 25.13$

**17. (d)**

We can rewrite the given  $x(n)$  signal

$$x(n) = a^{|n|}, 0 < a < 1$$

The z-transform of the  $x(n)$  is  $X(z)$

$$X(z) = \sum_{n=0}^{\infty} a^n z^{-n} + \sum_{n=-\infty}^{-1} a^{-n} z^{-n}$$

(or)  $x[n] = a^n u(n) + a^{-n} u[-n - 1]$

$$X(z) = \frac{1}{1 - az^{-1}} - \frac{1}{1 - a^{-1}z^{-1}}; a < |z| < \frac{1}{a}$$

(or)

$$\left( \because a^{-n} u[-n - 1] \xrightarrow{z} \frac{-1}{1 - a^{-1}z^{-1}}; |z| < \frac{1}{a} \right)$$

$$= \frac{z}{z - a} - \frac{z}{z - \frac{1}{a}}; a < |z| < \frac{1}{a} = \frac{z^2 - \frac{z}{a} - z^2 + az}{(z - a)\left(z - \frac{1}{a}\right)}$$

$$X(z) = \frac{\left[ a - \frac{1}{a} \right] z}{(z - a)\left(z - \frac{1}{a}\right)}; a < |z| < \frac{1}{a}$$

This z-transform has poles at  $z = a, z = \frac{1}{a}$ , and a zero at  $z = 0$ .

∴ None of the given pole-zero diagram represents  $x(n)$ .

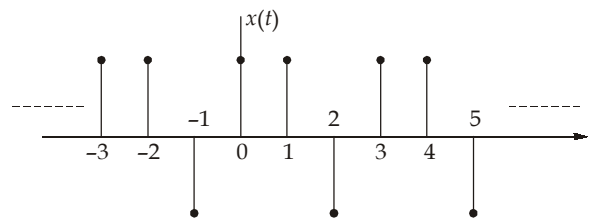
Hence option (d) is correct.

**18. (b)**

Given, periodic signal

$$x(t) = \sum_{m=-\infty}^{\infty} \delta(t - 3m) + \delta(t - 1 - 3m) - \delta(t - 2 - 3m)$$

redrawing the periodic signal



Clearly the period of  $x(t)$  is  $T = 3$

$\therefore y(t)$  is also periodic with period  $T = 3$ .

The fundamental frequency of  $x(t)$  is,

$$\omega_0 = \frac{2\pi}{T} = \frac{2\pi}{3}$$

Let  $a_k$  represents the fourier series coefficient of  $x(t)$ . Then

$$\begin{aligned} a_k &= \frac{1}{T} \int_0^T x(t) e^{-j\omega_0 kt} dt \\ &= \frac{1}{3} \int_0^3 (\delta(t) + \delta(t-1) - \delta(t-2)) e^{-j\frac{2\pi}{3}kt} dt \end{aligned}$$

$$a_k = \frac{1}{3} \left[ 1 + e^{-j\frac{2\pi}{3}k} - e^{-j\frac{2\pi}{3}k \times 2} \right]$$

at  $k = 3$ ;

$$a_3 = \frac{1}{3} (1 + e^{-j2\pi} - e^{-j4\pi})$$

$$a_3 = \frac{1}{3}$$

The frequency response of the system is given,

$$\begin{aligned} H(j\omega) &= e^{j\omega/4} - e^{-j\omega/4} \\ &= 2j \sin \frac{\omega}{4} \end{aligned}$$

$$\therefore b_k = H\left(j\frac{2\pi}{3}k\right) a_k = \left( j2 \sin \frac{2\pi}{12}k \right) a_k$$

at  $k = 3$

$$b_3 = \left( j2 \sin \frac{\pi}{2} \right) \frac{1}{3} = j\frac{2}{3}$$

$$\therefore |b_3| = 0.66$$

19. (a)

Given,  $y[n] \xleftrightarrow{DTFT} y(e^{j\omega})$

also,  $Im[y(e^{j\omega})] = 3 \sin \omega + \sin 3\omega$

We know that,  $Even\{y[n]\} \xleftrightarrow{DTFT} Re\{y(e^{j\omega})\}$

$$\text{Odd}\{y[n]\} \xleftrightarrow{\text{DTFT}} j\text{Im}\{y(e^{j\omega})\}$$

∴ the inverse DTFT of  $j\text{Im}\{y(e^{j\omega})\}$  is the odd part of  $y[n]$ .

Let  $y_0[n]$

$$\begin{aligned} y_0[n] &= \text{inverse DTFT}\{j3 \sin \omega + j\sin 3\omega\} \\ &= \text{DTFT}^{-1}\left[\frac{1}{2}\left[3e^{j\omega} - 3e^{-j\omega} + e^{j3\omega} - e^{-j3\omega}\right]\right] \end{aligned}$$

$$y_0[n] = \frac{1}{2}\{3\delta[n+1] - 3\delta[n-1] + \delta[n+3] - \delta[n-3]\}$$

Since  $y[n]$  is real and causal (given)

$$\begin{aligned} y[n] &= 2y_0[n]u[n] + y[0]\delta[n] \\ &= y[0]\delta[n] - 3\delta[n-1] - \delta[n-3] \end{aligned}$$

also given,  $y(e^{j\omega})\Big|_{\omega=\pi} = \sum_{n=-\infty}^{\infty} y[n](-1)^n$  (by definition of DTFT)

$$3 = y(0) + 3 + 1$$

∴  $y(0) = -1$

Hence,  $y[n] = -\delta[n] - 3\delta[n-1] - \delta[n-3]$

at  $n = 3$

$$y[3] = -1$$

20. (d)

Given  $x(t)$  is real,

i.e.,  $\text{Even}\{x(t)\} = \frac{x(t) + x(-t)}{2} \xleftrightarrow{\text{FT}} \text{Re}\{X(j\omega)\}$

given inverse Fourier Transform,

$$\text{IFT}\{\text{Re}\{X(j\omega)\}\} = |t|e^{-|t|}$$

∴  $\text{Even}\{x(t)\} = \frac{x(t) + x(-t)}{2} = |t|e^{-|t|}$

also it is known that  $x(t) = 0$  for  $t \leq 0$

This implies that  $x(-t)$  is zero for  $t > 0$

∴ We conclude that,  $x(t) = 2|t|e^{-|t|}$  for  $t \geq 0$

∴ at  $t = 1$ ,  $x(1) = 2e^{-1} = 0.736$

21. (d)

We know that,  $X(K)$  is DFT of  $x(n)$

$$X(K) = \sum_{n=0}^{N-1} x(n)e^{-j\frac{2\pi nK}{N}}$$

$$= \sum_{n=0}^5 x(n) \cdot e^{-j\frac{2\pi nK}{6}}$$

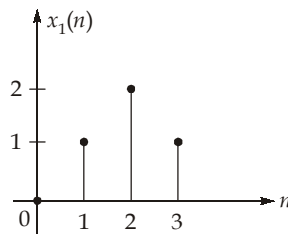
$$X(K) = \sum_{n=0}^5 x(n)e^{-j\frac{\pi nK}{3}}$$

$$\begin{aligned}
 &= x(0)e^{-j0} + x(1)e^{-j\pi K/3} + x(2)e^{-j2\pi K/3} + x(3)e^{-j\pi K} \\
 &\quad + x(4)e^{-j\frac{4\pi K}{3}} + x(5)e^{-j\frac{5\pi K}{3}} \\
 &= 3e^{-j0} + 2e^{-j\pi K/3} + 1 \cdot e^{-j\frac{2\pi K}{3}} + 0 + 1 \cdot e^{-j\frac{4\pi K}{3}} + 2e^{-j\frac{5\pi K}{3}} \\
 &= 3 + 2e^{-j\pi K/3} + e^{-j2\pi K/3} + e^{j2\pi K/3} + 2e^{j\pi K/3} \quad \left[ \because e^{-j\frac{5\pi K}{3}} = e^{j\frac{\pi K}{3}} \right] \\
 X(K) &= 3 + 4\cos\frac{\pi K}{3} + 2\cos\frac{2\pi K}{3}
 \end{aligned}$$

22. (b)

The given signal  $x(n]$  can be expressed as follows:

where,  $N_0 = 4,$  
$$x(n) = \sum_{K=0}^{\infty} x_1(n - KN_0) \quad \dots(1)$$



$x_1(n]$  can be expressed as

$$x_1(n) = \delta(n - 1) + 2\delta(n - 2) + \delta(n - 3)$$

by taking z-transform,

$$X_1(z) = z^{-1} + 2z^{-2} + z^{-3}$$

$$X_1(z) = z^{-1}[1 + 2z^{-1} + z^{-2}]$$

$$\begin{aligned}
 \therefore X(z) &= X_1(z) \left[ 1 + z^{-N_0} + z^{-2N_0} + z^{-3N_0} + \dots \right] \quad \text{[from equation (1)]} \\
 &= X_1(z) \sum_{m=0}^{\infty} (z^{-N_0})^m
 \end{aligned}$$

$$\therefore X(z) = X_1(z) \cdot \frac{1}{1 - z^{-N_0}}; |z^{-N_0}| < 1 \longrightarrow |z| > 1$$

where,  $N_0 = 4$

$$\therefore X(z) = \frac{X_1(z)}{1 - z^{-4}}; |z| > 1$$

$$\text{(or)} \quad X(z) = \frac{z^{-1} [1 + 2z^{-1} + z^{-2}]}{1 - z^{-4}}; |z| > 1$$

23. (b)

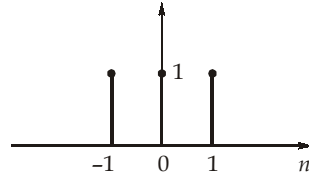
The given waveform has half wave symmetry

i.e., 
$$x(t) = -x\left(t \pm \frac{T}{2}\right)$$

$\therefore, a_k$  will be zero for even integer values of  $k$ .

24. (c)

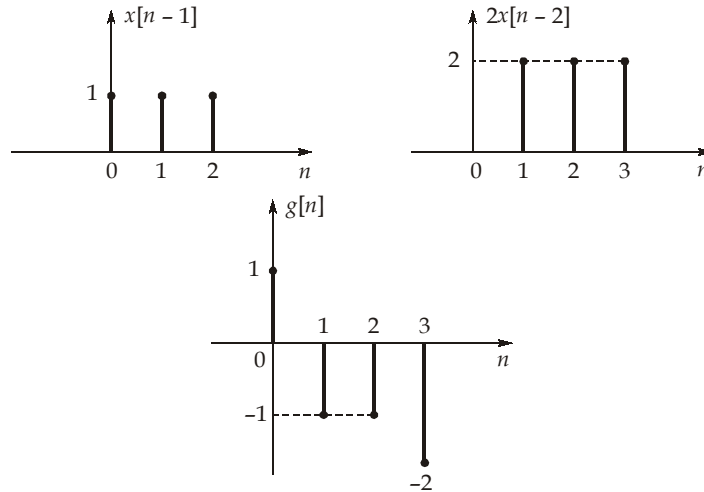
$$x[n] = \text{rect}_2[2n]$$



∴

$$g[n] = x[n] \otimes \{\delta[n-1] - 2\delta[n-2]\}$$

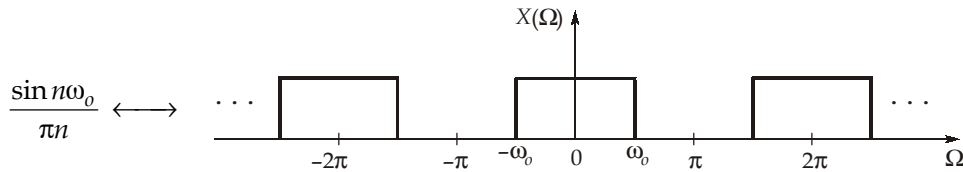
$$= x[n-1] - 2x[n-2]$$



⇒

$$g[2] = -1 \text{ and } g[3] = -2$$

25. (c)



Given :

$$h(n) = \frac{\sin\left(\frac{n\pi}{4}\right)}{\pi n}$$

∴

$$H(\Omega) = \begin{cases} 1 & ; \quad |\Omega| < \frac{\pi}{4} \\ 0 & ; \quad \frac{\pi}{4} < |\Omega| < \pi \end{cases}$$

Using DTFS,

$$x(n) = \sum_{k=0}^4 C_k e^{jk \frac{2\pi}{5} n}$$

Since,  $\Omega_0 = \frac{2\pi}{N_0} = \frac{2\pi}{5}$ , and the filter passes only frequencies in the range  $|\Omega| \leq \frac{\pi}{4}$ , hence only the

DC term is passed.

$$C_0 = \frac{1}{N} \sum_{n=0}^{N-1} x(n) = \frac{1}{5} \sum_{n=0}^4 x(n) = \frac{3}{5}$$

Thus, output  $y(n) = \frac{3}{5}$  for all  $n$ .

26. (a)

Since,  $e^{-j\frac{\pi}{2}} = -j$  and  $e^{j\frac{\pi}{2}} = j$   
 $\therefore H(\omega) = -j \operatorname{sgn}(\omega)$

$$\operatorname{sgn}(t) \xleftrightarrow{\text{FT}} \frac{2}{j\omega}$$

Using duality property,  $\frac{2}{jt} \xleftrightarrow{\text{FT}} 2\pi \operatorname{sgn}(-\omega) = -2\pi \operatorname{sgn}(\omega)$

or  $\frac{1}{\pi t} \xleftrightarrow{\text{FT}} -j \operatorname{sgn}(\omega)$

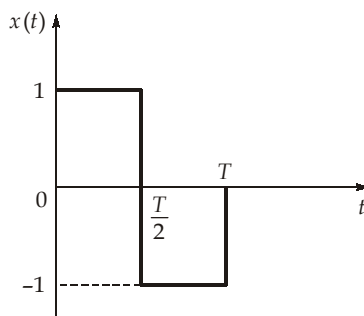
$$\therefore h(t) = \frac{1}{\pi t}$$

27. (c)

For a periodic wave,

$$F(s) = \frac{X(s)}{1 - e^{-sT}}$$

where  $X(s)$  is the Laplace transform of signal for one time period.



$$X(s) = \int_0^T x(t) e^{-st} dt = \int_0^{T/2} e^{-st} dt + \int_{T/2}^T -1 e^{-st} dt$$

$$X(s) = \frac{e^{-st}}{-s} \Big|_0^{T/2} - \frac{e^{-st}}{-s} \Big|_{T/2}^T = -\frac{1}{s} \left[ e^{-\frac{sT}{2}} - 1 \right] + \frac{1}{s} \left[ e^{-sT} - e^{-\frac{sT}{2}} \right]$$

$$X(s) = \frac{e^{-sT} - 2e^{-\frac{sT}{2}} + 1}{s} = \frac{\left[ 1 - e^{-\frac{sT}{2}} \right]^2}{s}$$

$$\therefore F(s) = \frac{\left[ 1 - e^{-\frac{sT}{2}} \right]^2}{s(1 - e^{-sT})} = \frac{\left[ 1 - e^{-\frac{sT}{2}} \right]^2}{s \left[ 1 - e^{-\frac{sT}{2}} \right] \left[ 1 + e^{-\frac{sT}{2}} \right]}$$

$$F(s) = \frac{1 - e^{-sT/2}}{s(1 + e^{-sT/2})}$$

28. (b)

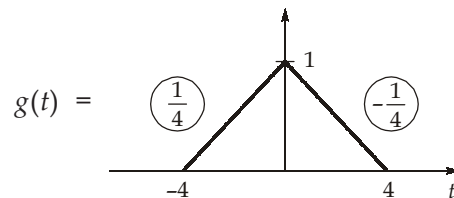
$$X(\omega) = \frac{\sin^2 2\omega}{\omega^2} \cos 2\omega = \left( \frac{\sin 2\omega}{\omega} \right)^2 \cos 2\omega$$

$$X(\omega) = 4S_a^2(2\omega) \cos 2\omega$$

Let

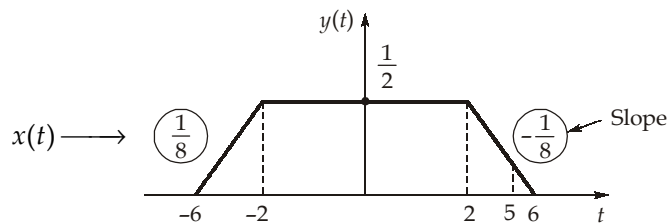
$$G(\omega) = 4S_a^2(2\omega)$$

∴



∴

$$x(t) = \frac{g(t-2) + g(t+2)}{2}$$

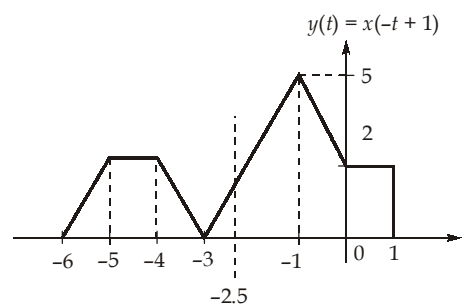


$$\therefore x(t)|_{t=5} = \frac{1}{8} = 0.125$$

29. (a)

Let,  $y(t) = x(-t + 1)$ .

$$\int_{-\infty}^{\infty} x(-t+1) \delta'(t+2.5) dt = \int_{-\infty}^{\infty} y(t) \delta'(t+2.5) dt = -y'(t)|_{t=-2.5}$$



$$\int_{-\infty}^{\infty} x(-t+1) \delta'(t+2.5) dt = -y'(t)|_{t=-2.5} = -(\text{slope of } y(t) \text{ at } t = -2.5)$$

$$= -\left(\frac{5}{2}\right) = -2.50$$

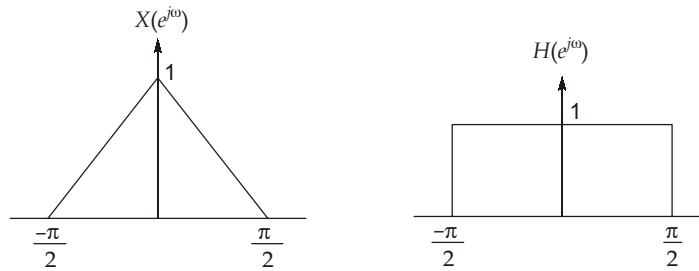
30. (d)

$$y[n] = x[n] * h[n]$$

$$= \left( \frac{\sin \frac{\pi}{4} n}{\pi n} \right)^2 * \left( \frac{\sin \omega_c n}{\pi n} \right)$$

Convolution in time domain specifies multiplication in frequency domain

thus,  $x[n]$  has a Fourier transform equal to a triangular pulse with width  $\frac{\pi}{2}$  and the width of the filter  $H(e^{j\omega})$  should also have a limit of  $\frac{\pi}{2}$  to have  $x[n] = y[n]$ .



∴

$$\omega_c = \frac{\pi}{2}$$

$$2\pi f_c = \frac{\pi}{2}$$

$$f_c = \frac{1}{4} = 0.25 \text{ Hz}$$

