

**MADE EASY**

India's Best Institute for IES, GATE & PSUs

Delhi | Bhopal | Hyderabad | Jaipur | Pune | Kolkata

Web: www.madeeasy.in | E-mail: info@madeeasy.in | Ph: 011-45124612**EC-EE****ENGINEERING MATHEMATICS****Duration : 1:00 hr.****Maximum Marks : 50**

Read the following instructions carefully

1. This question paper contains **30** objective questions. **Q.1-10** carry one mark each and **Q.11-30** carry two marks each.
2. Answer all the questions.
3. Questions must be answered on Objective Response Sheet (**ORS**) by darkening the appropriate bubble (marked **A, B, C, D**) using HB pencil against the question number. Each question has only one correct answer. In case you wish to change an answer, erase the old answer completely using a good soft eraser.
4. There will be **NEGATIVE** marking. For each wrong answer **1/3rd** of the full marks of the question will be deducted. More than one answer marked against a question will be deemed as an incorrect response and will be negatively marked.
5. Write your name & Roll No. at the specified locations on the right half of the **ORS**.
6. No charts or tables will be provided in the examination hall.
7. Choose the **Closest** numerical answer among the choices given.
8. If a candidate gives more than one answer, it will be treated as a **wrong answer** even if one of the given answers happens to be correct and there will be same penalty as above to that questions.
9. If a question is left blank, i.e., no answer is given by the candidate, there will be **no penalty** for that question.

DO NOT OPEN THIS TEST BOOKLET UNTIL YOU ARE ASKED TO DO SO

Q.No. 1 to Q.No. 10 carry 1 mark each

- Q.1** Identify the correct statement from the following
- Commutative property not holds for addition of matrices
 - Associative property not holds for addition of matrices
 - Commutative property not holds for multiplication of matrices
 - None of the above
- Q.2** The density function of repairing a machine is given by $f(x) = \frac{1}{2}e^{-\frac{x}{2}}$, where 'x' is repair time in hours. The probability that the repair time is more than 2 hours is
- 0.368
 - 0.482
 - 0.518
 - 0.632
- Q.3** The values of a and b for which the following system has no solutions are respectively
- $$\begin{aligned} ax + y + 2z &= 0 \\ x + 2y + z &= b \\ 2x + y + az &= 0 \end{aligned}$$
- $a = -1, b = 0$
 - $a = 2, b = 0$
 - $a = -1, b \neq 0$
 - $a = 2, b \neq 0$
- Q.4** Let X be an exponential random variable with rate parameter λ . Then find variance of X .
- $\frac{1}{\lambda}$
 - $\frac{1}{\lambda^2}$
 - $\frac{2}{\lambda}$
 - $\frac{2}{\lambda^2}$
- Q.5** The rank of matrix, $A = \begin{bmatrix} 1 & 2 & 1 \\ 2 & 3 & 1 \\ 1 & 1 & 0 \end{bmatrix}$ is _____.
- 1
 - 2
 - 0
 - 3
- Q.6** The following system of homogeneous equations:
- $$\begin{aligned} 2x + y + 2z &= 0 \\ x + y + 3z &= 0 \\ 4x + 3y + bz &= 0 \end{aligned}$$

has non-trivial solution, then the value of 'b' is _____.

- 2
- 8
- 16
- 32

- Q.7** Mean and variance of the random variable x having binomial distribution are 4 and 2 respectively then $P(x = 1)$ is
- 1/4
 - 1/16
 - 1/8
 - 1/32

- Q.8** At the point $x = 1$, the function

$$f(x) = \begin{cases} x^3 - 1; & 1 < x < \infty \\ x - 1; & -\infty < x \leq 1 \end{cases} \text{ is}$$

- Continuous and differentiable
- Continuous and not differentiable
- Discontinuous and differentiable
- Discontinuous and not differentiable

- Q.9** Consider the following function.

$$f(x) = \sqrt{36 - 4x^2}$$

Find the points at which f has absolute minimum and absolute maximum respectively.

- $x = 0, x = 6$
- $x = 6, x = 0$
- $x = 0, x = 3$
- $x = 3, x = 0$

- Q.10** Which of the following represents the LU decomposition of the given matrix. (Using Crout's method)

$$A = \begin{bmatrix} 2 & 4 \\ 6 & 3 \end{bmatrix}$$

- $L = \begin{bmatrix} 1 & 0 \\ 6 & 1 \end{bmatrix} \quad U = \begin{bmatrix} 2 & 2 \\ 0 & -9 \end{bmatrix}$

- $L = \begin{bmatrix} 1 & 0 \\ 6 & -9 \end{bmatrix} \quad U = \begin{bmatrix} 2 & 2 \\ 0 & 1 \end{bmatrix}$

- $L = \begin{bmatrix} 2 & 0 \\ 6 & -9 \end{bmatrix} \quad U = \begin{bmatrix} 1 & 2 \\ 0 & 1 \end{bmatrix}$

- $L = \begin{bmatrix} 1 & 2 \\ 0 & 1 \end{bmatrix} \quad U = \begin{bmatrix} 2 & 0 \\ 6 & 9 \end{bmatrix}$

Q. No. 11 to Q. No. 30 carry 2 marks each

Q.11 If the proportion of handicapped people in a large population is 0.006, then what is the probability that there will be atmost one handicapped person in a randomly chosen group of 500 people? Use Poisson approximation to compute the probability.

- (a) $3e^{-4}$ (b) $2e^{-3}$
 (c) $4e^{-3}$ (d) $3e^{-2}$

Q.12 $E[X] = 1$ and $\text{Var}[X] = 2$, which one of the following is not correct?

- (a) $E[6X] = 6$ (b) $\text{Var}[6X] = 72$
 (c) $E[1 - X] = 0$ (d) $\text{Var}[1 - X] = 3$

Q.13 Which of the following is/are true?

S_1 : Maximum number of distinct eigen values of matrix A less than size of matrix A.

S_2 : Product of eigen values of matrix A is equal to Sum of diagonal elements of A.

S_3 : The characteristic roots (eigen values) of Hermitian matrix are real.

- (a) Only S_2 and S_3 (b) Only S_1 and S_2
 (c) Only S_3 (d) Only S_1

Q.14 Find an eigen vector corresponding to largest eigen value of matrix $A =$

$$\begin{bmatrix} 1 & -1 & 1 \\ 1 & -1 & 1 \\ -1 & 1 & 1 \end{bmatrix}$$

- (a) $\begin{bmatrix} 1 \\ 1 \\ 1 \end{bmatrix}$ (b) $\begin{bmatrix} 1 \\ 2 \\ 1 \end{bmatrix}$

- (c) $\begin{bmatrix} 2 \\ 1 \\ 1 \end{bmatrix}$ (d) $\begin{bmatrix} 1 \\ 2 \\ 1 \\ 0 \end{bmatrix}$

Q.15 Consider the function $y = x^2 - 6x + 9$. The maximum value of y obtained when x varies over the interval 2 to 5 will be at _____.

- (a) 5 (b) 6
 (c) 7 (d) 8

Q.16 The value of $\int_{-2}^2 |1 - x^4| dx$ is _____.

- (a) 10 (b) 12
 (c) 14 (d) 16

Q.17 Consider the given matrix:

$$\begin{bmatrix} 6 & 3 & 7 \\ 32 & 13 & 37 \\ 10 & 4 & 11 \end{bmatrix}$$

The value of the determinant of the above matrix is _____.

- (a) 8 (b) 10
 (c) 12 (d) 14

Q.18 The absolute maximum value of the function $f(x, y) = 2 + 2x + 2y - x^2 - y^2$ is _____.

- (a) 2 (b) 4
 (c) 6 (d) 8

Q.19 If $\lim_{x \rightarrow 1} \frac{x^x - x}{x - 1 - \log x} = A$, then A is _____.

- (a) 0
 (b) 1
 (c) 2
 (d) Limit does not exists

Q.20 The value of integral $\int_1^3 \frac{|x-2|}{x} dx$ is _____.

- (a) $2 \ln \frac{4}{3}$ (b) $2 \ln \frac{3}{4}$
 (c) $\ln \frac{4}{3}$ (d) $4 \ln \frac{2}{3}$

Q.21 Evaluate $\int \frac{\sin \sqrt{x}}{\sqrt{x}} dx$

- (a) $-\cos \sqrt{x} + c$ (b) $-2 \cos(x)^{3/2} + c$
 (c) $-2 \sin \sqrt{x} + c$ (d) $-2 \cos \sqrt{x} + c$

Q.22 Which of the following represents the LU decomposition of the given matrix. (Using Doolittle method)

$$A = \begin{bmatrix} 25 & 5 & 1 \\ 64 & 8 & 1 \\ 144 & 12 & 1 \end{bmatrix}$$

(a) $L = \begin{bmatrix} 1 & 0 & 0 \\ 2.56 & 1 & 0 \\ 5.76 & 3.5 & 1 \end{bmatrix} U = \begin{bmatrix} 25 & 5 & 1 \\ 0 & -4.8 & -1.56 \\ 0 & 0 & 0.7 \end{bmatrix}$

(b) $L = \begin{bmatrix} 25 & 0 & 0 \\ 2.56 & 1 & 0 \\ 5.76 & 3.5 & 0.7 \end{bmatrix} U = \begin{bmatrix} 1 & 5 & 1 \\ 0 & -4.8 & -1.56 \\ 0 & 0 & 1 \end{bmatrix}$

(c) $L = \begin{bmatrix} 1 & 0 & 0 \\ 2.56 & 1 & 0 \\ 5.76 & 3.5 & 1 \end{bmatrix} U = \begin{bmatrix} 25 & -5 & 1 \\ 0 & 4.8 & 1.56 \\ 0 & 0 & -0.7 \end{bmatrix}$

(d) $L = \begin{bmatrix} 25 & 0 & 0 \\ 2.56 & -4.8 & 0 \\ 5.76 & 3.5 & 0.7 \end{bmatrix} U = \begin{bmatrix} 1 & 5 & 1 \\ 0 & 1 & -1.56 \\ 0 & 0 & 1 \end{bmatrix}$

Q.23 What is the value of $\int_0^{\pi/2} \log(\tan x) dx$?

- (a) $-2\pi \log 2$ (b) $-\pi \log 2$
 (c) 1 (d) 0

Q.24 Suppose we have 2 bags. Bag 1 contains 3 red and 7 green balls. Bag 2 contains 4 red and 8 green balls. A person tosses a coin and if it is heads goes to bag 1 and draws a ball. If it is tails, he goes to bag 2 and draws a ball. Given that the ball draw is red, then what is probability that it came from bag 1?

- (a) 0.500 (b) 0.250
 (c) 0.317 (d) 0.288

25. Consider the function $y = x^2 - 6x + 9$. The maximum value of y obtained when x varies over the interval 2 to 5 will be at _____.

- (a) 2 (b) 4
 (c) 5 (d) 6

Q.26 Consider the system of linear equations given below:

$$-2x + y + z = l$$

$$x - 2y + z = m$$

$$x + y - 2z = n$$

If $l + m + n = 0$, then the system of equations has

- (a) No solution
 (b) Trivial solutions
 (c) Unique solution
 (d) Infinitely many solutions

Q.27 A matrix $A = \begin{bmatrix} 1 & 0 & -1 \\ 1 & 2 & 1 \\ 2 & 2 & 3 \end{bmatrix}$ has three linearly

independent eigen vectors X_1, X_2, X_3 corresponding to the three eigen values 1, 2 and 3 respectively. Which of the following is correct?

- (a) X_1 and X_3 are orthogonal
 (b) X_2 and X_3 are orthogonal
 (c) X_1 and X_2 are orthogonal
 (d) None of these

Q.28 A function is defined by $f(x) = 2x^3 - 3x^2 - 12x + 5$ for $-2 \leq x \leq 3$. Which one of the following statements is true about this function?

- (a) function is decreasing for $(-2, -1)$.
 (b) function has a minima for $x = -1$.
 (c) function has a maxima for $x = 2$.
 (d) function is decreasing for $(-1, 2)$.

Q.29 The value of $\lim_{x \rightarrow \frac{\pi}{4}} \frac{\sec^2 x - 2 \tan x}{1 + \cos 4x}$ is

- (a) 0.5 (b) 0.25
 (c) 1 (d) 2

Q.30 How many different value of x exist for the following equation:

$$\begin{vmatrix} x+2 & 2x+3 & 3x+4 \\ 2x+3 & 3x+4 & 4x+5 \\ 3x+5 & 5x+8 & 10x+17 \end{vmatrix} = 0$$

- (a) 2 (b) 3
 (c) 1 (d) 4





MADE EASY

India's Best Institute for IES, GATE & PSUs

Delhi | Bhopal | Hyderabad | Jaipur | Pune | Kolkata

Web: www.madeeasy.in | E-mail: info@madeeasy.in | Ph: 011-45124612

ENGINEERING MATHEMATICS

EC-EE

Date of Test : 26/03/2024

ANSWER KEY >

- | | | | | |
|--------|---------|---------|---------|---------|
| 1. (c) | 7. (d) | 13. (c) | 19. (c) | 25. (c) |
| 2. (a) | 8. (b) | 14. (a) | 20. (a) | 26. (d) |
| 3. (c) | 9. (d) | 15. (a) | 21. (d) | 27. (d) |
| 4. (b) | 10. (c) | 16. (b) | 22. (a) | 28. (d) |
| 5. (b) | 11. (c) | 17. (b) | 23. (d) | 29. (a) |
| 6. (b) | 12. (d) | 18. (b) | 24. (c] | 30. (a) |

DETAILED EXPLANATIONS

1. (c)

Commutative for multiplication of matrices does not hold.

$$AB \neq BA$$

2. (a)

$$\begin{aligned} \text{Probability} &= \int_2^{\infty} f(x) dx \\ &= \int_2^{\infty} \left[\frac{1}{2} e^{-\frac{x}{2}} \right] dx = \left[-e^{-\frac{x}{2}} \right]_2^{\infty} = e^{-1} = 0.368 \end{aligned}$$

3. (c)

The matrix formed by the coefficients is $\begin{bmatrix} a & 1 & 2 \\ 1 & 2 & 1 \\ 2 & 1 & a \end{bmatrix}$

$$\text{Determinant} = 2a^2 - 2a - 4$$

$$\therefore D = 0 \text{ for } a = 2 \text{ or } a = -1$$

(A) If $D \neq 0$, then the system will have unique solution because the rank of matrix will be 3.

(B) If $a = 2$, the matrix formed by the coefficients is $\begin{bmatrix} 2 & 1 & 2 \\ 1 & 2 & 1 \\ 2 & 1 & 2 \end{bmatrix}$

The rank of matrix is 2.

Considering 'z' as side unknown.

The characteristic determinant will be $\begin{bmatrix} 2 & 1 & 0 \\ 1 & 2 & b \\ 2 & 1 & 0 \end{bmatrix}$

The determinant of this is 0.

The system will have infinite solutions when $a = 2$.

(C) If $a = -1$, the matrix formed by the coefficients is $\begin{bmatrix} -1 & 1 & 2 \\ 1 & 2 & 1 \\ 2 & 1 & -1 \end{bmatrix}$

Its rank is 2.

Considering 'z' as side unknown.

The characteristic matrix is $\begin{bmatrix} -1 & 1 & 0 \\ 1 & 2 & b \\ 2 & 1 & 0 \end{bmatrix}$

The determinant of this matrix is $3b$.The system will have no solution if $b \neq 0$

$$\therefore \text{For } a = -1 \text{ and } b \neq 0, \text{ the system will have no solution.}$$

4. (b)

Probability density function:

$$f(x) = \lambda \cdot e^{-\lambda x}, x > 0$$

$$E(X) = \int_0^{\infty} x \cdot f(x) \cdot dx$$

$$= \int_0^{\infty} x \lambda \cdot e^{-\lambda x} \cdot dx = \frac{1}{\lambda}$$

$$\text{Var}(X) = E(X^2) - [E(X)]^2$$

$$E(X^2) = \int_0^{\infty} x^2 \cdot f(x) \cdot dx$$

$$= \int_0^{\infty} x^2 \cdot \lambda \cdot e^{-\lambda x} \cdot dx = \frac{2}{\lambda^2}$$

$$\Rightarrow \text{Var}(X) = \frac{2}{\lambda^2} - \left(\frac{1}{\lambda}\right)^2 = \frac{1}{\lambda^2}$$

5. (b)

$$A = \begin{bmatrix} 1 & 2 & 1 \\ 2 & 3 & 1 \\ 1 & 1 & 0 \end{bmatrix}$$

$$R_2 \leftarrow R_2 - 2(R_1) \text{ and } R_3 \leftarrow R_3 - R_1$$

$$= \begin{bmatrix} 1 & 2 & 1 \\ 0 & -1 & -1 \\ 0 & -1 & -1 \end{bmatrix}$$

$$R_3 \leftarrow R_3 - R_2$$

$$\Rightarrow A = \begin{bmatrix} 1 & 2 & 1 \\ 0 & -1 & -1 \\ 0 & 0 & 0 \end{bmatrix}$$

\therefore Rank of matrix is 2.

6. (b)

For a non-trivial solution of homogeneous system of equations,

$$|A| = 0$$

where
$$A = \begin{bmatrix} 2 & 1 & 2 \\ 1 & 1 & 3 \\ 4 & 3 & b \end{bmatrix}$$

$$\Rightarrow 2 \begin{vmatrix} 1 & 3 \\ 3 & b \end{vmatrix} - 1 \begin{vmatrix} 1 & 3 \\ 4 & b \end{vmatrix} + 2 \begin{vmatrix} 1 & 1 \\ 4 & 3 \end{vmatrix} = 0$$

$$\Rightarrow b = 8$$

7. (d)

Given,

$$np = 4$$

$$npq = 2$$

$$q = \frac{1}{2}, p = \frac{1}{2}, n = 8$$

$$P(x = 1) = {}^n C_1 p^1 q^{n-1}$$

$$= {}^8 C_1 \left(\frac{1}{2}\right)^1 \left(\frac{1}{2}\right)^7 = \frac{8}{2^8} = \frac{1}{2^5} = \frac{1}{32}$$

$$= 0.03125$$

8. (b)

$$\lim_{x \rightarrow 1^-} f(x) = \lim_{x \rightarrow 1^-} (x - 1) = 0$$

$$\lim_{x \rightarrow 1^+} f(x) = \lim_{x \rightarrow 1^+} (x^3 - 1) = 0$$

Also

$$f(1) = 0$$

Thus

$$\lim_{x \rightarrow 1^-} f(x) = \lim_{x \rightarrow 1^+} f(x) = f(1)$$

 $\Rightarrow f$ is continuous at $x = 1$
And $Lf'(1) = 2, Rf'(1) = 1$
 $\Rightarrow f$ is not differentiable at $x = 1$

9. (d)

$$f(x) = \sqrt{36 - 4x^2}$$

At $x = 0, f(x) = 6$ If $x \neq 0 \Rightarrow f(x) < 6$
 $\therefore f$ has absolute maximum at $x = 0$
At $x = 3, f(x) = 0$
 $\therefore f$ has absolute minimum at $x = 3$.

10. (c)

Using Crout's method

$$A = \begin{bmatrix} l_{11} & 0 \\ l_{21} & l_{22} \end{bmatrix} \begin{bmatrix} 1 & u_{12} \\ 0 & 1 \end{bmatrix}$$

$$\begin{bmatrix} 2 & 4 \\ 6 & 3 \end{bmatrix} = \begin{bmatrix} l_{11} & 0 \\ l_{21} & l_{22} \end{bmatrix} \begin{bmatrix} 1 & u_{12} \\ 0 & 1 \end{bmatrix}$$

$$l_{11} = 2$$

$$l_{11} u_{12} = 4$$

$$u_{12} = \frac{4}{2} = 2$$

$$l_{21} = 6$$

$$l_{21} u_{12} + l_{22} = 3$$

$$6 \times 2 + l_{22} = 3$$

$$l_{22} = 3 - 12$$

$$l_{22} = -9$$

So, LU decomposition of given matrix is

$$L = \begin{bmatrix} 2 & 0 \\ 6 & -9 \end{bmatrix} \quad U = \begin{bmatrix} 1 & 2 \\ 0 & 1 \end{bmatrix}$$

Note: Candidates can use options to solve such questions.

11. (c)

$$P(x = r) = \frac{e^{-\lambda} \cdot \lambda^r}{r!}, \text{ where } \lambda = np$$

$$\lambda = 500 \times 0.006 = 3$$

$$P(x \leq 1) = P(x = 0) + P(x = 1)$$

$$= \frac{e^{-\lambda} \cdot \lambda^0}{0!} + \frac{e^{-\lambda} \cdot \lambda^1}{1!}$$

$$= e^{-3} + e^{-3} \cdot 3 = 4e^{-3}$$

12. (d)

$$E[6X] = 6.E[X] = 6$$

$$\text{Var}[6X] = 6^2 \text{Var}[X] = 36 \times 2 = 72$$

$$E[1 - X] = 1 + (-1) E[X] = 1 - 1 = 0$$

$$\text{Var}[1 - X] = (-1)^2 \text{Var}[X] = \text{Var}[X] = 2$$

$$\therefore \text{Var}[1 - X] \neq 3$$

13. (c)

Maximum number of distinct eigen values = Size of matrix A.

$\therefore S_1$ is False.

Sum of eigen values = Sum of diagonal elements.

$\therefore S_2$ is False.

14. (a)

$$|\lambda - AI| = (1 - \lambda)(\lambda^2 - 2) + (2 - \lambda) - \lambda = -\lambda^3 + \lambda^2$$

$$\Rightarrow -\lambda^3 + \lambda^2 = 0$$

$$\Rightarrow -\lambda^2(\lambda - 1) = 0$$

$$\lambda = 0, \lambda = 1$$

The largest eigen value is 1

$$A - I = \begin{bmatrix} 0 & -1 & 1 \\ 1 & -2 & 1 \\ -1 & 1 & 0 \end{bmatrix}_{R_1 \leftrightarrow R_2}$$

$$\Rightarrow \begin{bmatrix} 1 & -2 & 1 \\ 0 & -1 & 1 \\ -1 & 1 & 0 \end{bmatrix}_{R_3 \leftarrow R_3 + R_1}$$

$$\Rightarrow \begin{bmatrix} 1 & -2 & 1 \\ 0 & -1 & 1 \\ 0 & -1 & 1 \end{bmatrix}_{R_3 \leftarrow R_3 - R_2}$$

$$\Rightarrow \begin{bmatrix} 1 & -2 & 1 \\ 0 & -1 & 1 \\ 0 & 0 & 0 \end{bmatrix}_{R_1 \leftarrow R_1 - 2R_2}$$

$$\Rightarrow \begin{bmatrix} 1 & 0 & -1 \\ 0 & -1 & 1 \\ 0 & 0 & 0 \end{bmatrix}$$

$$[A - I]\vec{x} = 0$$

$$x_1 - x_3 = 0 \Rightarrow x_1 = x_3$$

$$-x_2 + x_3 = 0 \Rightarrow x_2 = x_3$$

$$\vec{x} = \begin{bmatrix} x_1 \\ x_2 \\ x_3 \end{bmatrix} = \begin{bmatrix} x_3 \\ x_3 \\ x_3 \end{bmatrix} = \begin{bmatrix} 1 \\ 1 \\ 1 \end{bmatrix} x_3$$

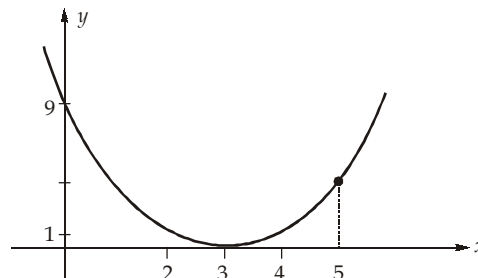
$$\therefore x_1 = \begin{bmatrix} 1 \\ 1 \\ 1 \end{bmatrix} \text{ is an eigen vector.}$$

15. (a)

$$y = x^2 - 6x + 9 = (x - 3)^2$$

$$y(2) = 1$$

$$y(5) = 4$$



\therefore Maximum value of y over the interval 2 to 5 will be at $x = 5$.

16. (b)

$$I = \int_{-2}^2 |1 - x^4| dx$$

The given function is an even function i.e., $f(x) = f(-x)$

$$\begin{aligned} \Rightarrow I &= 2 \int_0^2 |1 - x^4| dx \\ &= 2 \left\{ \int_0^1 (1 - x^4) dx + \int_1^2 (x^4 - 1) dx \right\} \\ &= 2 \left\{ \left[x - \frac{x^5}{5} \right]_0^1 + \left[\frac{x^5}{5} - x \right]_1^2 \right\} = 12 \end{aligned}$$

17. (b)

$$\begin{aligned} &6(13 \times 11 - 4 \times 37) - 3(32 \times 11 - 10 \times 37) + 7(32 \times 4 - 10 \times 13) \\ &= -30 + 54 - 14 = 10 \end{aligned}$$

18. (b)

$$\frac{\partial f}{\partial x} = 2 - 2x \qquad \frac{\partial f}{\partial y} = 2 - 2y$$

$$r = \frac{\partial^2 f}{\partial x^2} = -2 \qquad t = \frac{\partial^2 f}{\partial y^2} = -2, \qquad s = \frac{\partial^2 f}{\partial x \partial y} = 0$$

Finding stationary points,

$$\frac{\partial f}{\partial x} = 2 - 2x = 0$$

$$\Rightarrow x = 1$$

$$\frac{\partial f}{\partial y} = 2 - 2y = 0$$

$$\Rightarrow y = 1$$

At the stationary point (1, 1)

$$rt - s^2 = (-2)(-2) - 0 = 4 > 0$$

So, $f(x, y)$ is maxima at (1, 1)

$$\text{Maximum value of } f(x, y) = 2 + 2 + 2 - 1 - 1 = 4$$

19. (c)

$$\lim_{x \rightarrow 1} \frac{x^x - x}{x - 1 - \log x} \qquad \left(\frac{0}{0} \text{ form} \right)$$

$$= \lim_{x \rightarrow 1} \frac{\frac{d}{dx}(x^x) - 1}{1 - 0 - \frac{1}{x}}$$

Let,

$$y = x^x$$

$$\log y = x \log x$$

$$\therefore \frac{1}{y} \frac{dy}{dx} = x \cdot \frac{1}{x} + 1 \cdot \log x$$

$$\text{or} \qquad \frac{d}{dx}(x^x) = x^x(1 + \log x)$$

$$= \lim_{x \rightarrow 1} \frac{x^x(1 + \log x) - 1}{1 - \frac{1}{x}} \qquad \left(\frac{0}{0} \text{ form} \right)$$

$$= \lim_{x \rightarrow 1} \frac{\frac{d}{dx}(x^x) \cdot (1 + \log x) + x^x \left(\frac{1}{x} \right) - 0}{\frac{1}{x^2}}$$

$$= \lim_{x \rightarrow 1} \frac{x^x(1 + \log x)^2 + x^x \left(\frac{1}{x} \right)}{x^{-2}} = \frac{1(1+0)^2 + 1 \cdot 1}{1} = 2$$

20. (a)

$$|x-2| = \begin{cases} -(x-2); & x < 2 \\ (x-2); & x > 2 \end{cases}$$

$$\begin{aligned} \int_1^3 \frac{|x-2|}{x} dx &= \int_1^2 \frac{-(x-2)}{x} dx + \int_2^3 \frac{x-2}{x} dx \\ &= \int_1^2 \left(-1 + \frac{2}{x}\right) dx + \int_2^3 \left(1 - \frac{2}{x}\right) dx \\ &= [-x]_1^2 + [2\ln x]_1^2 + [x]_2^3 - 2[\ln x]_2^3 \\ &= -(2-1) + 2\ln 2 - 2\ln \frac{3}{2} + (3-2) \\ &= 2\ln 2 - 2\ln \frac{3}{2} \\ &= 2\ln \frac{2}{\frac{3}{2}} = 2\ln \frac{4}{3} \end{aligned}$$

21. (d)

Let $u = \sqrt{x}$

Then $du = \frac{1}{2\sqrt{x}} dx$

$\therefore dx = du \cdot 2\sqrt{x}$

$$\begin{aligned} \int \frac{\sin \sqrt{x}}{\sqrt{x}} dx &= \int \frac{\sin u}{\sqrt{x}} \cdot 2\sqrt{x} du = 2 \int \sin u du \\ &= -2 \cos \sqrt{x} + c \end{aligned}$$

22. (a)

Using Doolittle method:

$$A = LU$$

$$\begin{bmatrix} 25 & 5 & 1 \\ 64 & 8 & 1 \\ 144 & 12 & 1 \end{bmatrix} = \begin{bmatrix} 1 & 0 & 0 \\ l_{21} & 1 & 0 \\ l_{31} & l_{32} & 1 \end{bmatrix} \begin{bmatrix} u_{11} & u_{12} & u_{13} \\ 0 & u_{22} & u_{23} \\ 0 & 0 & u_{33} \end{bmatrix}$$

$$u_{11} = 25, u_{12} = 5, u_{13} = 1$$

$$u_{11} l_{21} = 64$$

$$l_{21} = \frac{64}{25} = 2.56$$

$$l_{21} u_{12} + u_{22} = 8$$

$$2.56 u_{12} + u_{22} = 8$$

$$u_{22} = -4.8$$

$$u_{13} l_{31} + u_{23} = 1$$

$$\begin{aligned}
 u_{23} &= -1.56 \\
 l_{31} u_{11} &= 144 \\
 l_{31} &= \frac{144}{25} = 5.76 \\
 l_{31}u_{12} + l_{32}u_{22} &= 12 \\
 (5.76 * 5) + (u_{22} l_{32}) &= 12 \\
 l_{32} &= 3.5 \\
 l_{31} u_{13} + l_{32} u_{23} + u_{33} &= 1 \\
 u_{33} &= 0.7
 \end{aligned}$$

So, LU decomposition is

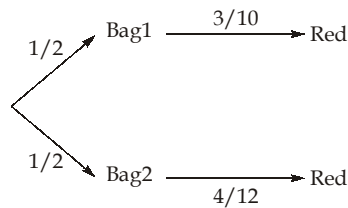
$$L = \begin{bmatrix} 1 & 0 & 0 \\ 2.56 & 1 & 0 \\ 5.76 & 3.5 & 1 \end{bmatrix} \quad U = \begin{bmatrix} 25 & 5 & 1 \\ 0 & -4.8 & -1.56 \\ 0 & 0 & 0.7 \end{bmatrix}$$

23. (d)

$$\begin{aligned}
 I &= \int_0^{\pi/2} \log\left(\frac{\sin x}{\cos x}\right) dx \\
 &= \int_0^{\pi/2} [\log(\sin x) dx - \log(\cos x) dx] \\
 &= \int_0^{\pi/2} \log \sin\left(\frac{\pi}{2} - x\right) dx - \int_0^{\pi/2} \log(\cos x) dx \\
 I &= 0
 \end{aligned}$$

24. (c)

The tree diagram for above problem, is shown below:

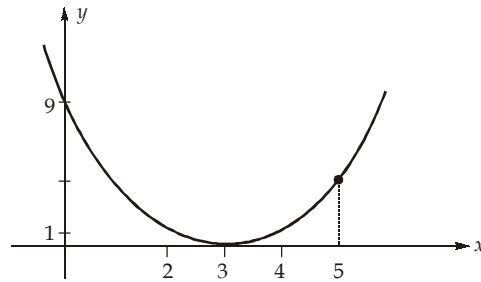


$$\begin{aligned}
 P(\text{bag1} | \text{Red}) &= \frac{P(\text{bag1} \cap \text{Red})}{P(\text{Red})} \\
 &= \frac{\frac{1}{2} \times \frac{3}{10}}{\frac{1}{2} \times \frac{3}{10} + \frac{1}{2} \times \frac{1}{3}} = \frac{\frac{3}{20}}{\frac{3}{20} + \frac{1}{6}} = 0.317
 \end{aligned}$$

25. (c)

$$\begin{aligned}
 y &= x^2 - 6x + 9 = (x - 3)^2 \\
 y(2) &= 1
 \end{aligned}$$

$$y(5) = 4$$



\therefore maximum value of y over the interval 2 to 5 will be at $x = 5$.

26. (d)

$$AX = B$$

$$\text{Augmented matrix, } [A : B] = \begin{bmatrix} -2 & 1 & 1 & : & l \\ 1 & -2 & 1 & : & m \\ 1 & 1 & -2 & : & n \end{bmatrix}$$

$$R_3 \rightarrow R_3 + R_2 + R_1:$$

$$[A : B] = \begin{bmatrix} -2 & 1 & 1 & : & l \\ 1 & -2 & 1 & : & m \\ 0 & 0 & 0 & : & l+m+n \end{bmatrix}$$

Since,

$$l + m + n = 0$$

$$\text{Rank of } [A : B] = 2$$

$$\text{Rank of } [A] = \text{Rank of } [A : B] = 2 < 3 \text{ (Number of variables)}$$

\Rightarrow Infinitely many solutions are possible.

27. (d)

For $\lambda = 1$

$$\begin{bmatrix} 0 & 0 & -1 \\ 1 & 1 & 1 \\ 2 & 2 & 2 \end{bmatrix} \begin{bmatrix} x_1 \\ x_2 \\ x_3 \end{bmatrix} = 0$$

$$X_1 = c_1 \begin{bmatrix} 1 \\ -1 \\ 0 \end{bmatrix}$$

For $\lambda = 2$

$$\begin{bmatrix} -1 & 0 & -1 \\ 1 & 0 & 1 \\ 2 & 2 & 1 \end{bmatrix} \begin{bmatrix} x_1 \\ x_2 \\ x_3 \end{bmatrix} = 0$$

$$x_1 + x_3 = 0$$

$$2x_1 + 2x_2 + x_3 = 0$$

$$X_2 = c_2 \begin{bmatrix} -2 \\ 1 \\ 2 \end{bmatrix}$$

For $\lambda = 3$

$$\begin{bmatrix} -2 & 0 & -1 \\ 1 & -1 & 1 \\ 2 & 2 & 0 \end{bmatrix} \begin{bmatrix} x_1 \\ x_2 \\ x_3 \end{bmatrix} = 0$$

$$x_1 = -x_2$$

$$x_1 = \frac{-1}{2}x_3$$

$$X_3 = c_3 \begin{bmatrix} -1 \\ 1 \\ 2 \end{bmatrix}$$

Since, $X_1^T X_2 \neq 0$

$$X_2^T X_3 \neq 0$$

$$X_3^T X_1 \neq 0$$

None of the above is correct.

28. (d)

$$f(x) = 2x^3 - 3x^2 - 12x + 5$$

$$f'(x) = 6x^2 - 6x - 12$$

For minima/maxima, $f'(x) = 0$

$$6x^2 - 6x - 12 = 0$$

$$x^2 - x - 2 = 0$$

$$(x + 1)(x - 2) = 0$$

$$x = -1, 2$$

$$f''(x) = 12x - 6$$

$$f''(-1) = -12 - 6 = -18 < 0 \Rightarrow \text{maxima}$$

$$f''(2) = 24 - 6 = 18 > 0 \Rightarrow \text{minima}$$

The function has maxima at $x = -1$ and minima at $x = 2$.

Critical point $(-1, 2)$ draw plot on line graph:

Since $0 \in (-1, 2)$ and $f'(0) = 6 \times 0^2 - 6 \times 0 - 12 = -12 < 0$



The function is decreasing between -1 and 2 .

29. (a)

Given,

$$\lim_{x \rightarrow \frac{\pi}{4}} \frac{\sec^2 x - 2 \tan x}{1 + \cos 4x} : \frac{0}{0} \text{ Form}$$

Applying L' hospital rule

$$\begin{aligned}
 &= \lim_{x \rightarrow \frac{\pi}{4}} \frac{\frac{d}{dx}(\sec^2 x - 2 \tan x)}{\frac{d}{dx}(1 + \cos 4x)} \\
 &= \lim_{x \rightarrow \frac{\pi}{4}} \frac{(2 \sec x \cdot \sec x \tan x - 2 \sec^2 x)}{-4 \sin 4x} \\
 &= \lim_{x \rightarrow \frac{\pi}{4}} \frac{\sec^2 x (\tan x - 1)}{-2 \sin 4x} \quad : \frac{0}{0} \text{ Form}
 \end{aligned}$$

Applying L' hospital's rule

$$\begin{aligned}
 &= \lim_{x \rightarrow \frac{\pi}{4}} \frac{2 \sec x \cdot \sec x \cdot \tan x (\tan x - 1) + \sec^2 x \sec^2 x}{-8 \cos 4x} \\
 &= \frac{2.2.1(1-1) + 2.2}{-8(-1)} = \frac{1}{2}
 \end{aligned}$$

30. (a)

Operating $R_3 - (R_1 + R_2)$ we get

$$\begin{vmatrix} x+2 & 2x+3 & 3x+4 \\ 2x+3 & 3x+4 & 4x+5 \\ 0 & 1 & 3x+8 \end{vmatrix} = 0 \quad (\text{Operating } R_2 - R_1 \text{ and } R_1 + R_3)$$

$$\text{or } \begin{vmatrix} x+2 & 2x+4 & 6x+12 \\ x+1 & x+1 & x+1 \\ 0 & 1 & 3x+8 \end{vmatrix} = 0$$

$$\text{or } (x+1)(x+2) \begin{vmatrix} 1 & 2 & 6 \\ 1 & 1 & 1 \\ 0 & 1 & 3x+8 \end{vmatrix} = 0$$

To bring one more zero in C_1 , operate $R_1 - R_2$.

$$\therefore (x+1)(x+2) \begin{vmatrix} 0 & 1 & 5 \\ 1 & 1 & 1 \\ 0 & 1 & 3x+8 \end{vmatrix} = 0$$

Now expand by C_1 .

$$\therefore -(x+1)(x+2)(3x+8-5) = 0 \text{ or } -3(x+1)(x+2)(x+1) = 0$$

$$\text{Thus, } x = -1, -1, -2.$$

